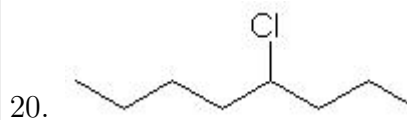
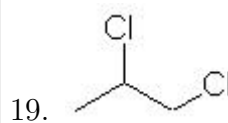
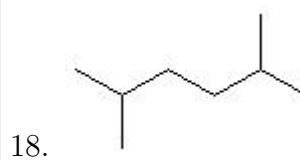
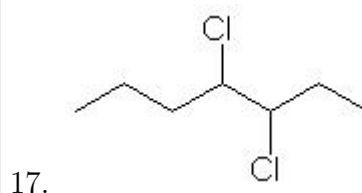
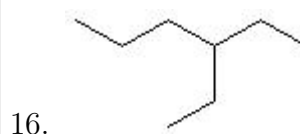
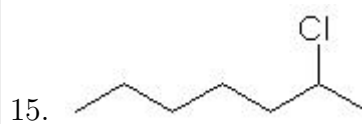
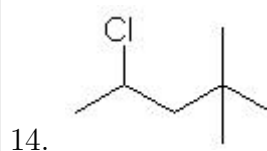
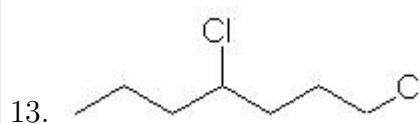
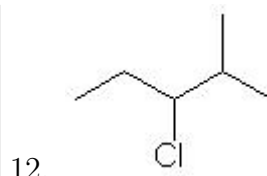
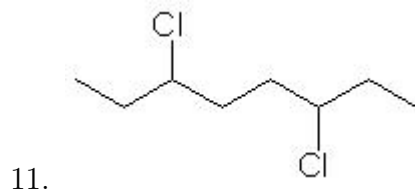
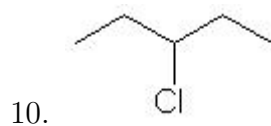
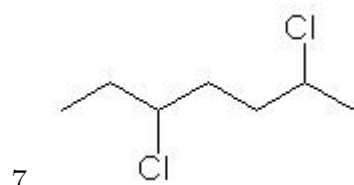
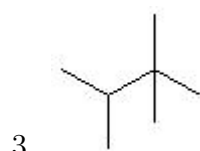
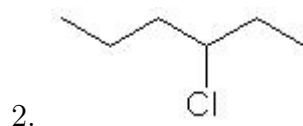
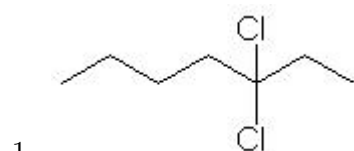


Name: _____

Class: _____

Date: _____

Name the following molecules using IUPAC nomenclature:



- Question 1: 3,3-dichloroheptane
- Question 2: 3-chlorohexane
- Question 3: 2,2,3-Trimethylbutane
- Question 4: butane
- Question 5: 2-Methylpentane
- Question 6: 1,8-dichlorooctane
- Question 7: 2,5-dichloroheptane
- Question 8: Nonane
- Question 9: 2,2-Dimethylpentane
- Question 10: 3-chloropentane
- Question 11: 3,6-dichlorooctane
- Question 12: 3-chloro-2-methylpentane
- Question 13: 1,4-dichloroheptane
- Question 14: 4-chloro-2,2-dimethylpentane
- Question 15: 2-chloroheptane
- Question 16: 3-Ethylhexane
- Question 17: 3,4-dichloroheptane
- Question 18: 2,5-Dimethylhexane
- Question 19: 1,2-dichloropropane
- Question 20: 4-chlorooctane