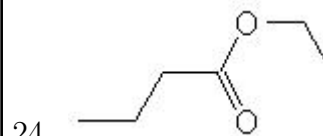
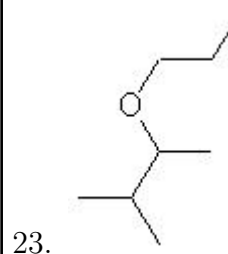
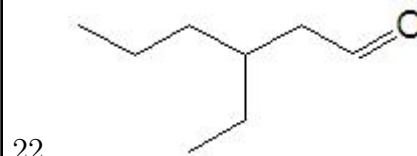
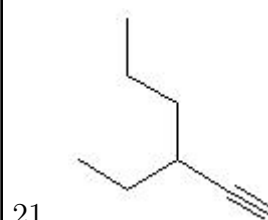
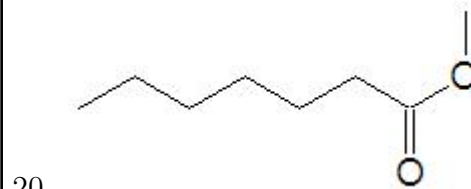
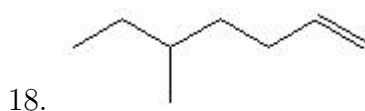
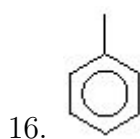
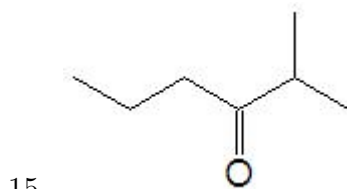
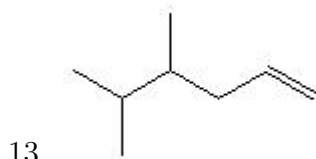
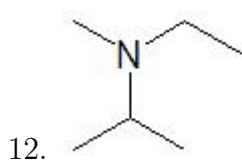
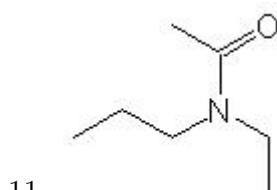
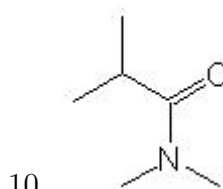
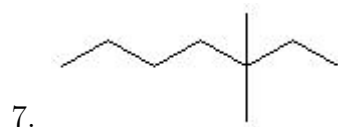
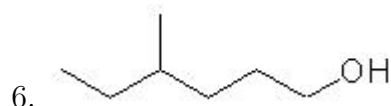
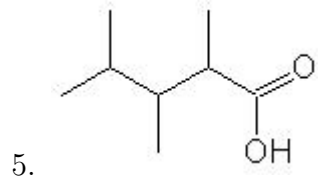
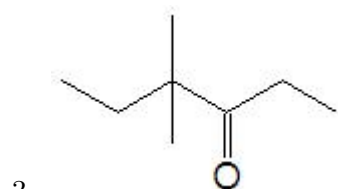
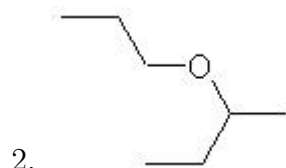



Name: _____

Class: _____

Date: _____

Name the following molecules using IUPAC nomenclature:



- Question 1: 1-butyne
- Question 2: 2-propoxybutane
- Question 3: 4,4-dimethyl-3-hexanone
- Question 4: 6-methyl-1-heptyne
- Question 5: 2,3,4-trimethylpentanoic acid
- Question 6: 4-methyl-1-hexanol
- Question 7: 3,3-dimethylheptane
- Question 8: 6-methyl-3-heptyne
- Question 9: 2,2-dimethyl-3-hexyne
- Question 10: N,N-dimethyl-2methylpropanamide
- Question 11: N-ethyl-N-propylethanamide
- Question 12: N-ethyl-N-methyl-2-propanamine
- Question 13: 4,5-dimethyl-1-hexene
- Question 14: 2-butene
- Question 15: 2-methyl-3-hexanone
- Question 16: toluene
- Question 17: 3-methyl-1-hexene
- Question 18: 5-methyl-1-heptene
- Question 19: 3-methoxyhexane
- Question 20: methyl heptanoate
- Question 21: 3-ethyl-1-hexyne
- Question 22: 3-ethylhexanal
- Question 23: 2-methyl-3-propoxybutane
- Question 24: ethyl butanoate
- Question 25: 2-methyl-2-hexene