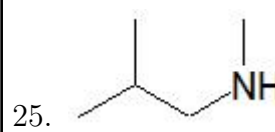
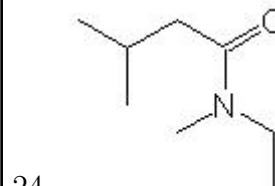
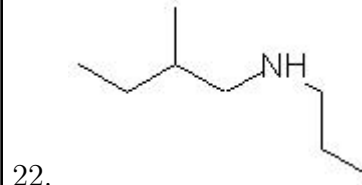
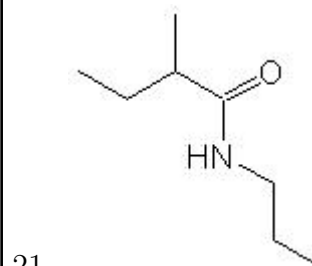
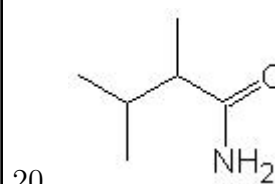
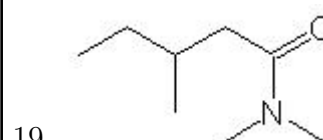
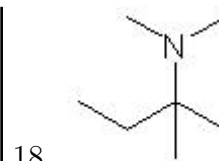
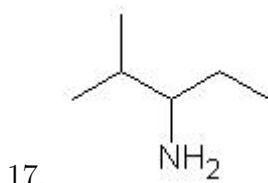
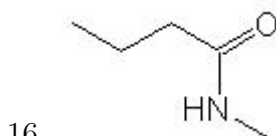
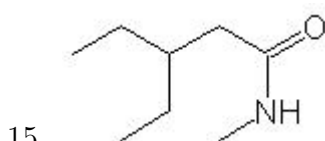
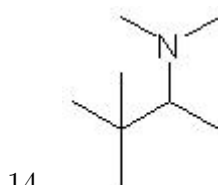
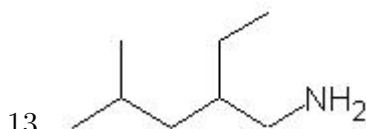
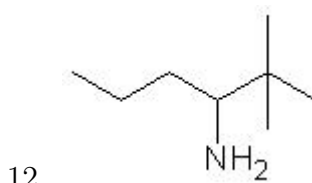
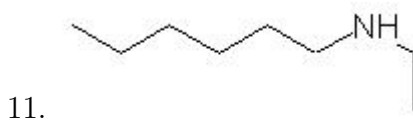
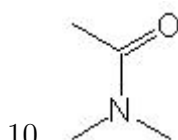
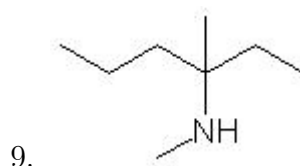
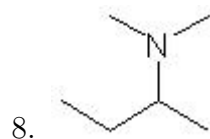
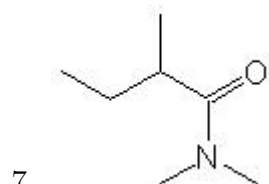
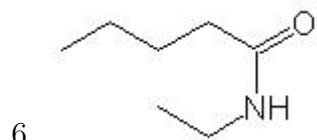
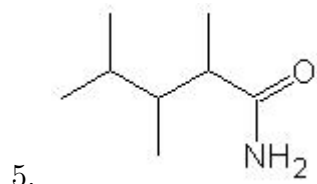
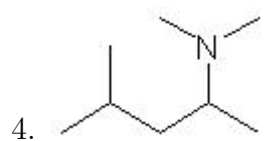
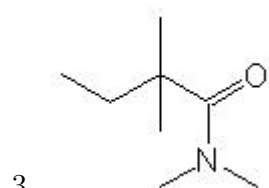
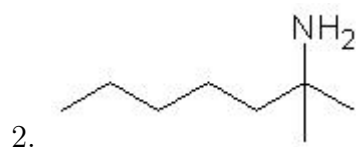
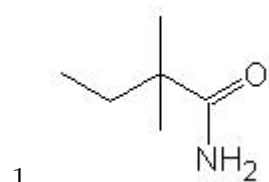


Name: _____

Class: _____

Date: _____

Name the following molecules using IUPAC nomenclature:



- Question 1: 2,2-dimethylbutanamide
- Question 2: 2-methyl-2-heptanamine
- Question 3: N,N,2,2-tetramethylbutanamide
- Question 4: N,N,4-trimethyl-2-pentanamine
- Question 5: 2,3,4-trimethylpentanamide
- Question 6: N-ethylpentanamide
- Question 7: N,N,2-trimethylbutanamide
- Question 8: N,N-dimethyl-2-butanamine
- Question 9: N,3-dimethyl-3-hexanamine
- Question 10: N,N-dimethylethanamide
- Question 11: N-ethyl-1-hexanamine
- Question 12: 2,2-dimethyl-3-hexanamine
- Question 13: 2-ethyl-4-methyl-1-pentanamine
- Question 14: N,N,3,3-tetramethyl-2-butanamine
- Question 15: 3-ethyl-N-methylpentanamide
- Question 16: N-methylbutanamide
- Question 17: 4-methyl-3-pentanamine
- Question 18: N,N,2-trimethyl-2-butanamine
- Question 19: N,N,3-trimethylpentanamide
- Question 20: 2,3-dimethylbutanamide
- Question 21: 2-methyl-N-propylbutanamide
- Question 22: 2-methyl-N-propyl-1-butanamine
- Question 23: N-methyl-N-propylethanamide
- Question 24: N-ethyl-N,3-dimethylbutanamide
- Question 25: N,2-dimethyl-1-propanamine