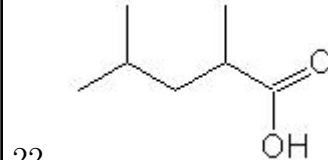
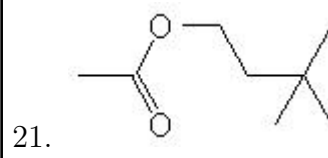
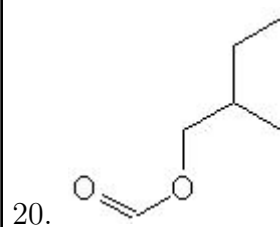
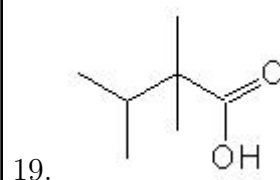
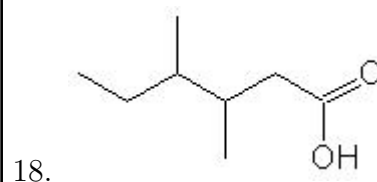
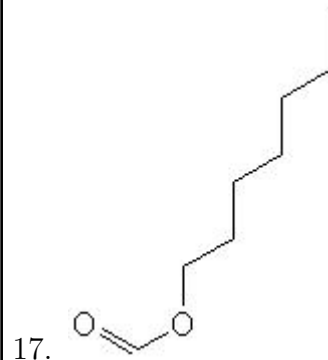
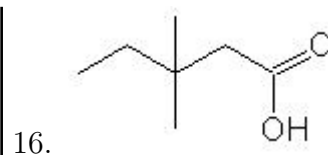

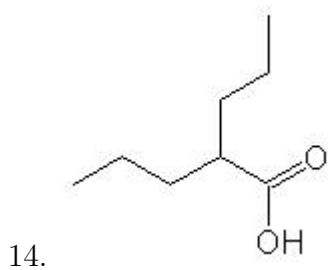
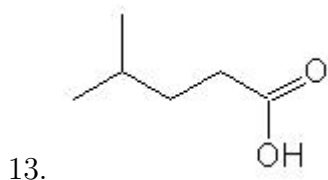
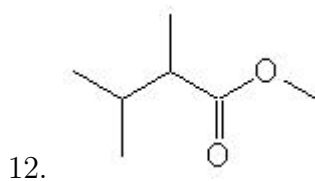
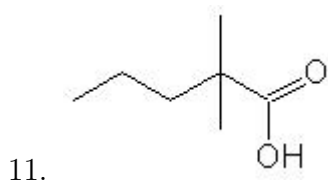
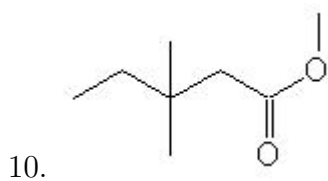
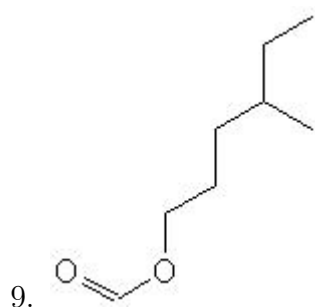
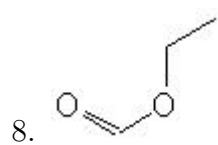
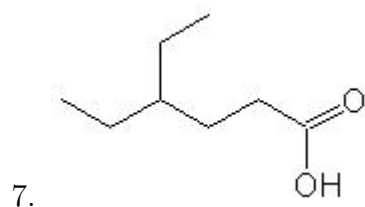
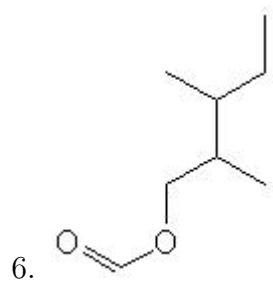
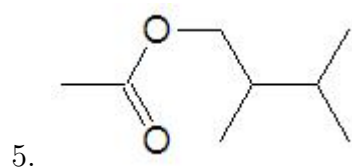
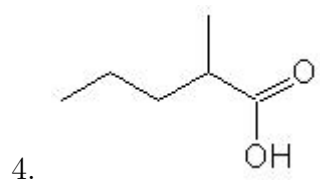
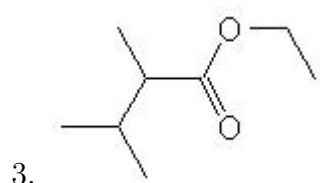
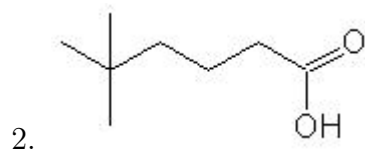
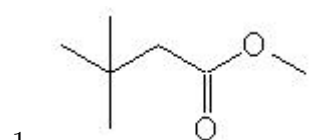


Name: _____

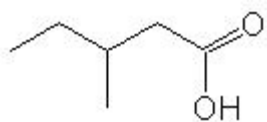
Class: _____

Date: _____

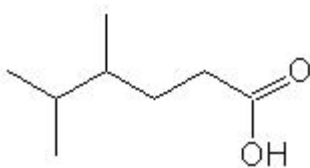
Name the following molecules using IUPAC nomenclature:



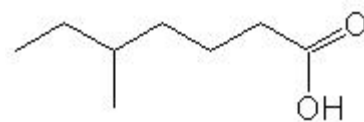
23.



24.



25.



- Question 1: methyl 3,3-dimethylbutanoate
- Question 2: 5,5-dimethylhexanoic acid
- Question 3: ethyl 2,3-dimethylbutanoate
- Question 4: 2-methylpentanoic acid
- Question 5: 2,3-dimethylbutyl ethanoate
- Question 6: 2,3-dimethylpentyl methanoate
- Question 7: 4-ethylhexanoic acid
- Question 8: ethyl methanoate
- Question 9: 4-methylhexyl methanoate
- Question 10: methyl 3,3-dimethylpentanoate
- Question 11: 2,2-dimethylpentanoic acid
- Question 12: methyl 2,3-dimethylbutanoate
- Question 13: 4-methylpentanoic acid
- Question 14: 2-propylpentanoic acid
- Question 15: methyl 5-methylhexanoate
- Question 16: 3,3-dimethylpentanoic acid
- Question 17: heptyl methanoate
- Question 18: 3,4-dimethylhexanoic acid
- Question 19: 2,2,3-trimethylbutanoic acid
- Question 20: 2-methylbutyl methanoate
- Question 21: 3,3-dimethylbutyl ethanoate
- Question 22: 2,4-dimethylpentanoic acid
- Question 23: 3-methylpentanoic acid
- Question 24: 4,5-dimethylhexanoic acid
- Question 25: 5-methylheptanoic acid