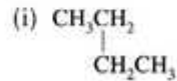
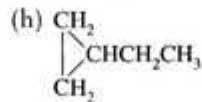
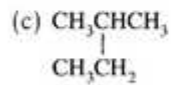
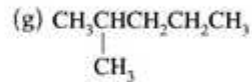
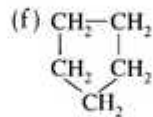
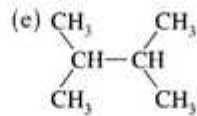


Name: \_\_\_\_\_

Date: \_\_\_\_\_

[3 pt] 1. Define the term Structural Isomer:

[3 pt] 2. Which of the following molecule(s) are isomers of each other. For example A/B, and C/D/E (not the correct answer btw).



[9 pt] 3. Give the name and formula for the 9 isomers of heptane.

(a)

(f)

(b)

(g)

(c)

(h)

(d)

(i)

(e)

