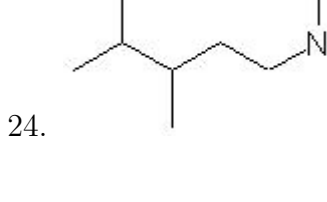
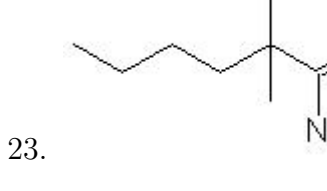
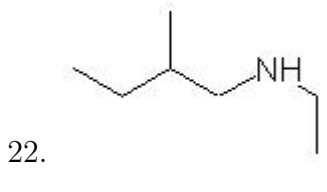
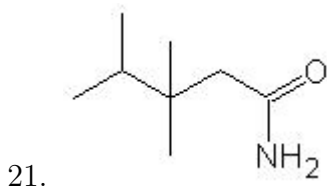
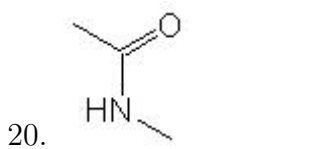
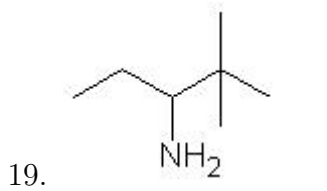
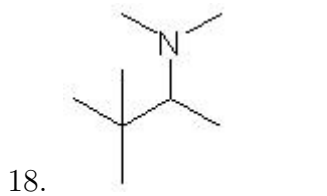
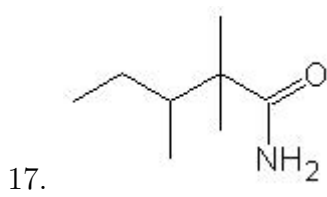
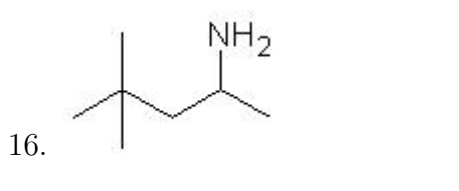
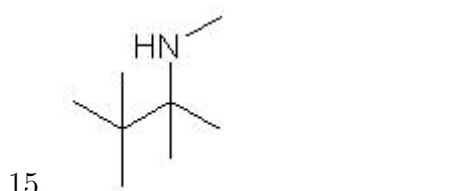
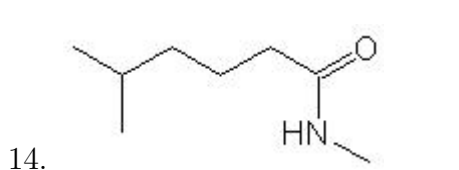
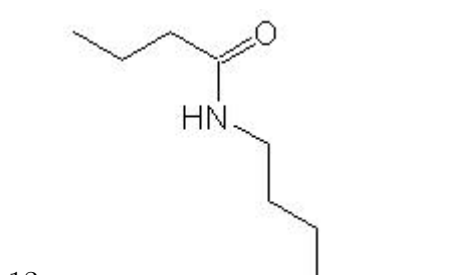
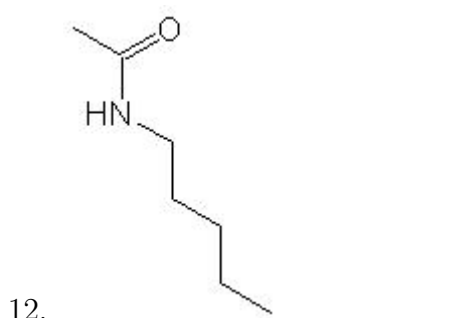
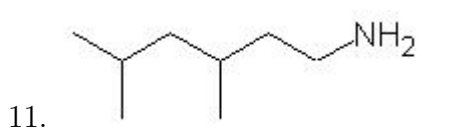
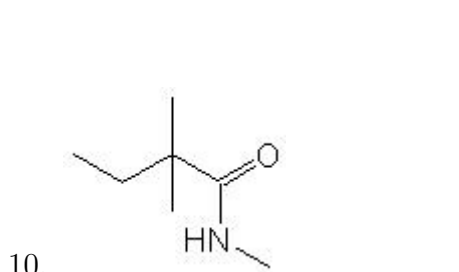
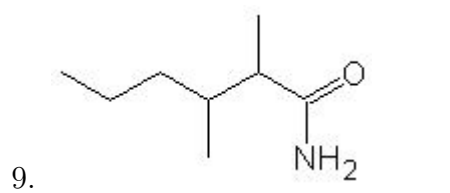
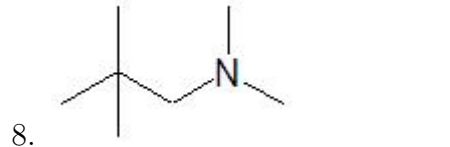
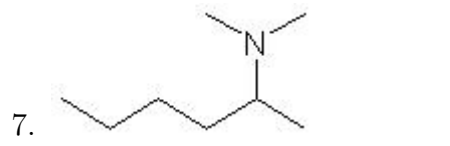
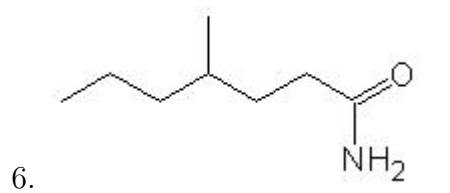
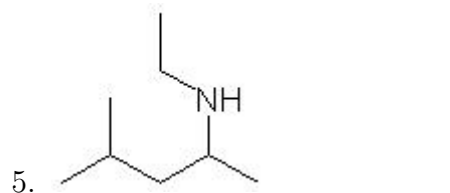
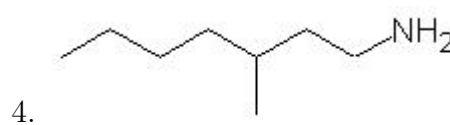
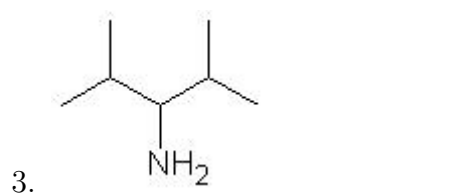
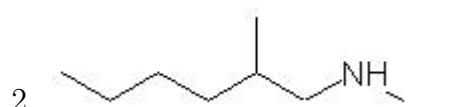
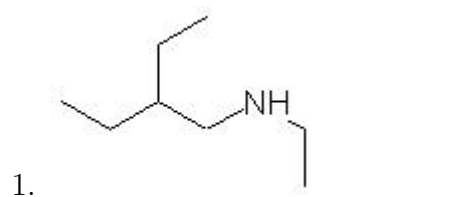


Name: _____

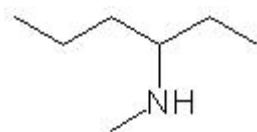
Class: _____

Date: _____

Name the following molecules using IUPAC nomenclature:



25.



- Question 1: 2-ethyl-N,N-dimethyl-1-butanamine
- Question 2: N,2-dimethyl-1-hexanamine
- Question 3: 2,4-dimethyl-3-pentanamine
- Question 4: 3-methyl-1-heptanamine
- Question 5: N-ethyl-4-methyl-2-pentanamine
- Question 6: 4-methylheptanamide
- Question 7: N,N-dimethyl-2-hexanamine
- Question 8: N,N,2,2-tetramethyl-1-propanamine
- Question 9: 2,3-dimethylhexanamide
- Question 10: N,2,2-trimethylbutanamide
- Question 11: 3,5-dimethyl-1-hexanamine
- Question 12: N-pentylethanamide
- Question 13: N-butylbutanamide
- Question 14: N,5-dimethylhexanamide
- Question 15: N,2,3,3-tetramethyl-2-butanamine
- Question 16: 4,4-dimethyl-2-pentanamine
- Question 17: 2,2,3-trimethylpentanamide
- Question 18: N,N,3,3-tetramethyl-2-butanamine
- Question 19: 2,2-dimethyl-3-pentanamine
- Question 20: N-methylethanamide
- Question 21: 3,3,4-trimethylpentanamide
- Question 22: N-ethyl-2-methyl-1-butanamine
- Question 23: 2,2-dimethylhexanamide
- Question 24: N,3,4-trimethyl-1-pentanamine
- Question 25: N-methyl-3-hexanamine