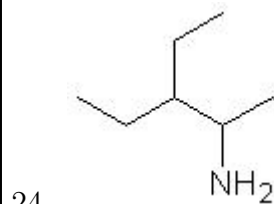
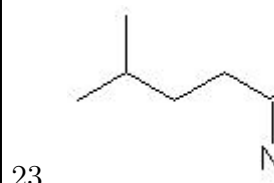
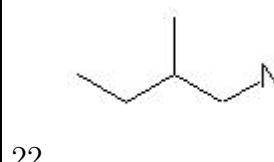
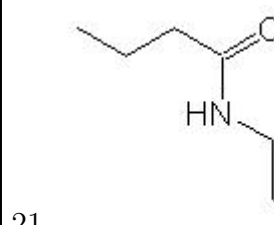
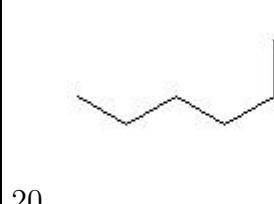
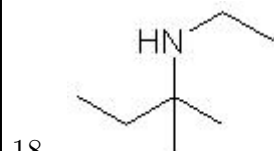
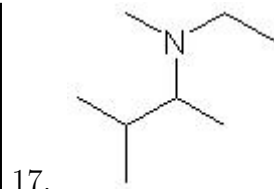
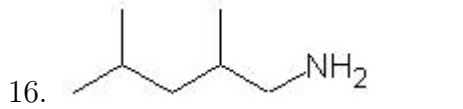
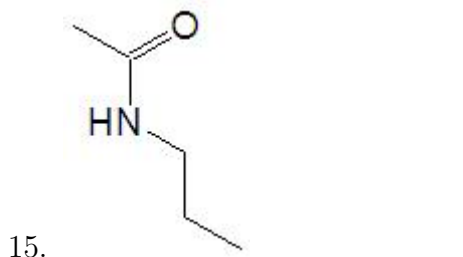
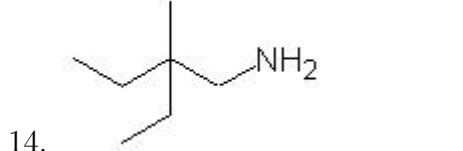
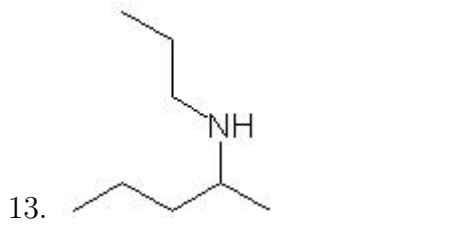
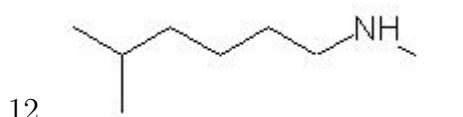
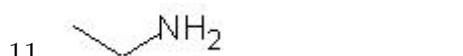
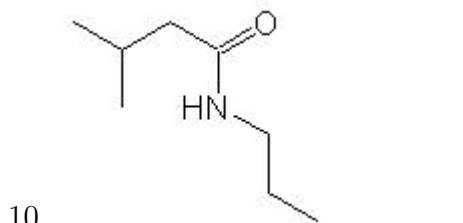
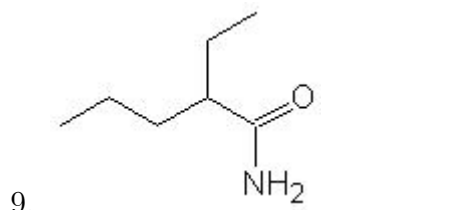
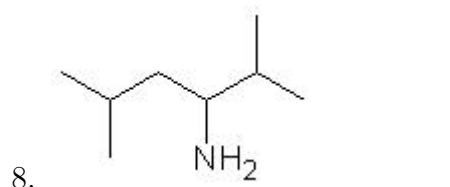
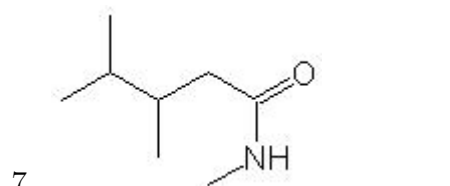
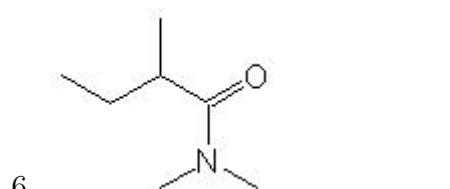
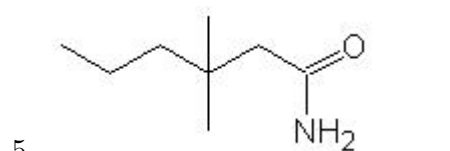
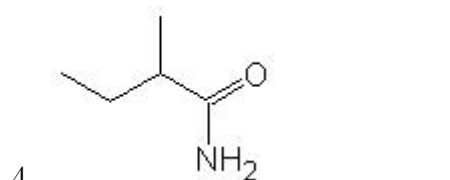
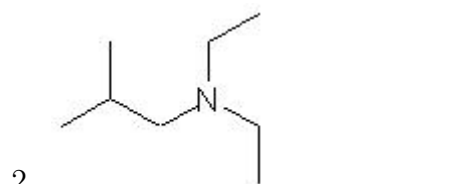
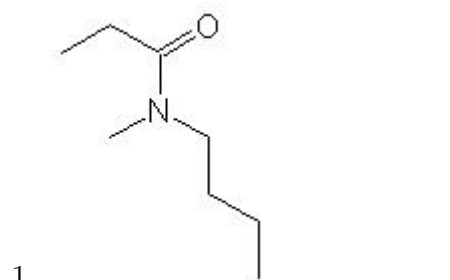


Name: _____

Class: _____

Date: _____

Name the following molecules using IUPAC nomenclature:



25.



|

|

- Question 1: N-butyl-N-methylpropanamide
- Question 2: N,N-diethyl-2-methyl-1-propanamine
- Question 3: 1-heptanamine
- Question 4: 2-methylbutanamide
- Question 5: 3,3-dimethylhexanamide
- Question 6: N,N,2-trimethylbutanamide
- Question 7: N,3,4-trimethylpentanamide
- Question 8: 2,5-dimethyl-3-hexanamine
- Question 9: 2-ethylpentanamide
- Question 10: 3-methyl-N-propylbutanamide
- Question 11: ethanamine
- Question 12: N,5-dimethyl-1-hexanamine
- Question 13: N-propyl-2-pentanamine
- Question 14: 2-ethyl-2-methyl-1-butanamine
- Question 15: N-propylethanamide
- Question 16: 2,4-dimethyl-1-pentanamine
- Question 17: N-ethyl-N,3-dimethyl-2-butanamine
- Question 18: 2-methyl-N-propyl-2-butanamine
- Question 19: 1-hexanamine
- Question 20: 2-ethylhexanamide
- Question 21: N-propylbutanamide
- Question 22: N-ethyl-2-methyl-1-butanamine
- Question 23: 4-methylpentanamide
- Question 24: 4-ethyl-3-hexanamine
- Question 25: 5-methyl-1-hexanamine