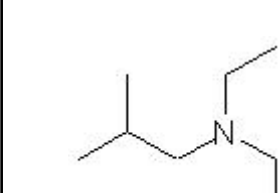
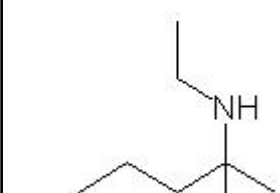
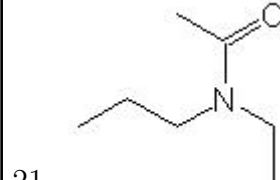
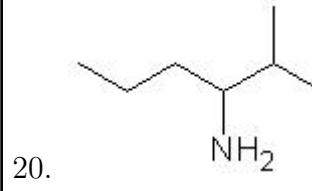
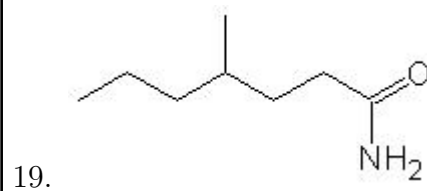
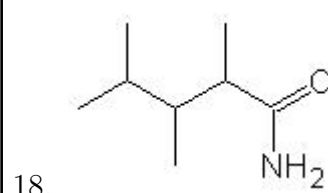
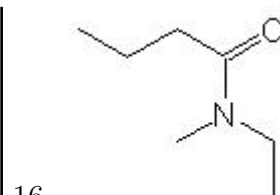
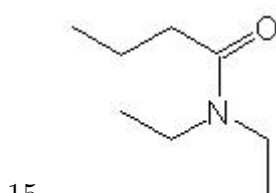
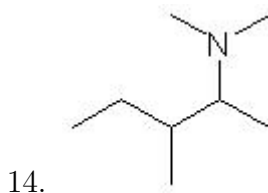
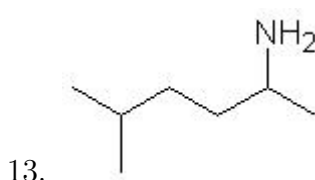
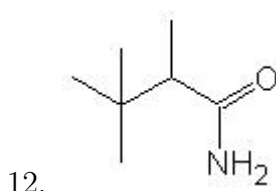
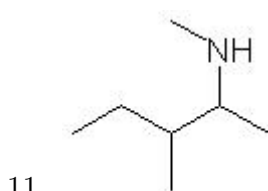
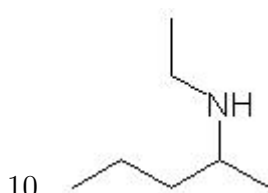
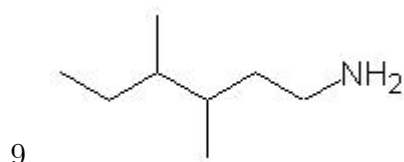
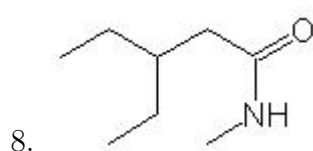
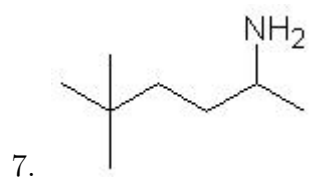
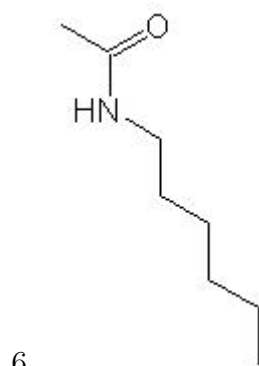
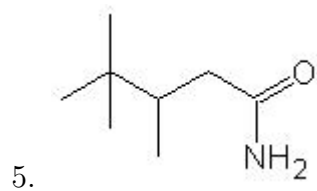
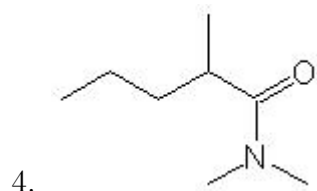
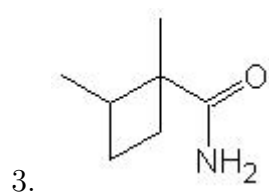
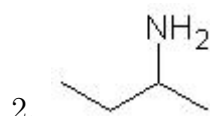
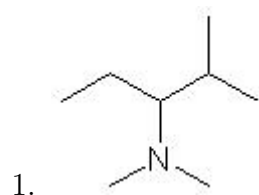


Name: \_\_\_\_\_

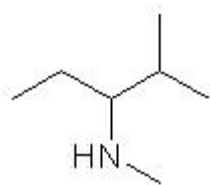
Class: \_\_\_\_\_

Date: \_\_\_\_\_

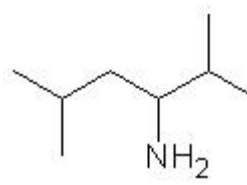
Name the following molecules using IUPAC nomenclature:



24.



25.



- Question 1: N,N,2-trimethyl-3-pentanamine
- Question 2: 2-butanamine
- Question 3: 2-ethyl-2,3-dimethylbutanamide
- Question 4: N,N,2-trimethylpentanamide
- Question 5: 3,4,4-trimethylpentanamide
- Question 6: N-hexylethanamide
- Question 7: 5,5-dimethyl-2-hexanamine
- Question 8: 3-ethyl-N-methylpentanamide
- Question 9: 3,4-dimethyl-1-hexanamine
- Question 10: N-ethyl-2-pentanamine
- Question 11: N,3-dimethyl-2-pentanamine
- Question 12: 2,3,3-trimethylbutanamide
- Question 13: 5-methyl-2-hexanamine
- Question 14: N,N,3-trimethyl-2-pentanamine
- Question 15: N,N-diethylbutanamide
- Question 16: N-ethyl-N-methylbutanamide
- Question 17: 2-pentanamine
- Question 18: 2,3,4-trimethylpentanamide
- Question 19: 4-methylheptanamide
- Question 20: 2-methyl-3-hexanamine
- Question 21: N-ethyl-N-propylethanamide
- Question 22: N-ethyl-2-methyl-2-pentanamine
- Question 23: N,N-diethyl-2-methyl-1-propanamine
- Question 24: N,2-dimethyl-3-pentanamine
- Question 25: 2,5-dimethyl-3-hexanamine