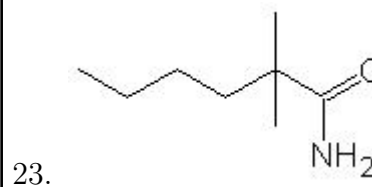
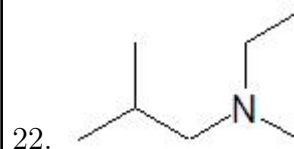
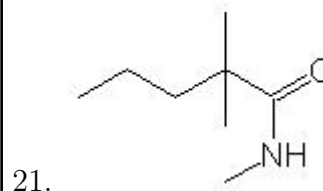
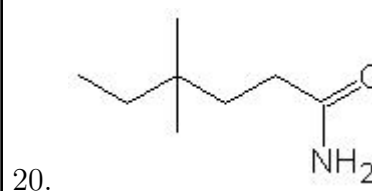
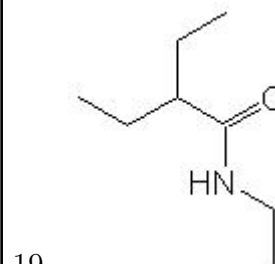
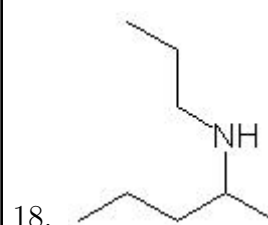
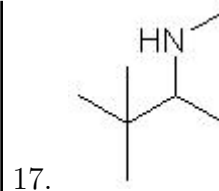
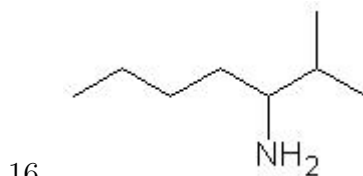
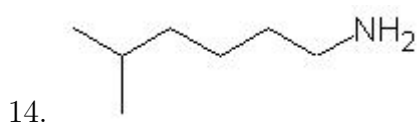
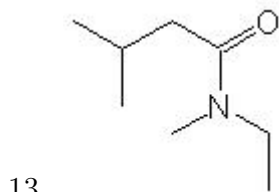
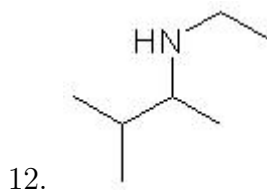
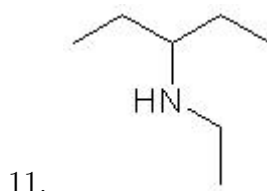
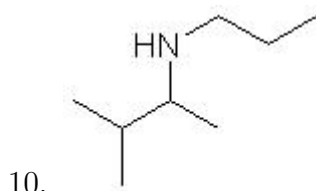
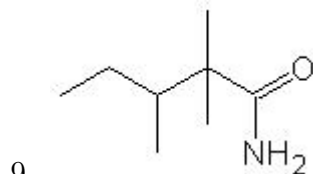
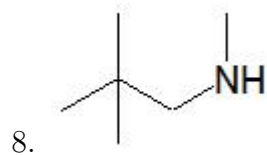
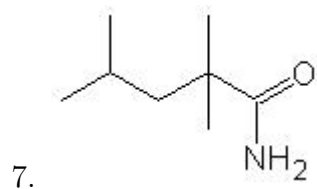
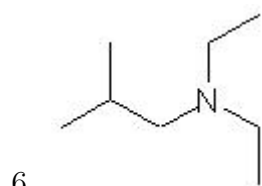
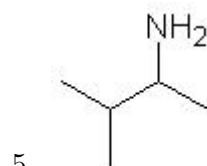
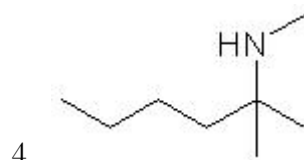
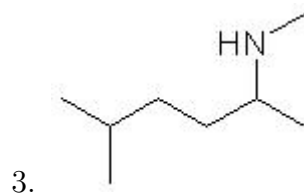
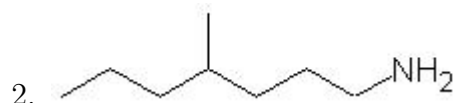
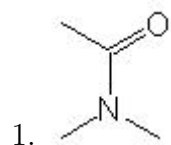


Name: \_\_\_\_\_

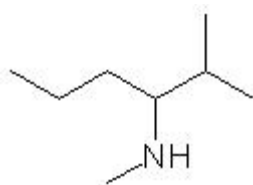
Class: \_\_\_\_\_

Date: \_\_\_\_\_

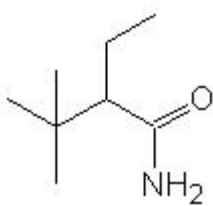
Name the following molecules using IUPAC nomenclature:



24.



25.



- Question 1: N,N-dimethylethanamide
- Question 2: 4-methyl-1-heptanamine
- Question 3: N-methyl-5-methyl-2-hexanamine
- Question 4: N-methyl-2-methyl-2-hexanamine
- Question 5: 3-methyl-2-butanamine
- Question 6: N,N-diethyl-2-methyl-1-propanamine
- Question 7: 2,2,4-trimethylpentanamide
- Question 8: N-methyl-2,2-dimethyl-1-propanamine
- Question 9: 2,2,3-trimethylpentanamide
- Question 10: N-propyl-3-methyl-2-butanamine
- Question 11: N-ethyl-3-pentanamine
- Question 12: N-ethyl-3-methyl-2-butanamine
- Question 13: N-ethyl-N-methyl-3-methylbutanamide
- Question 14: 5-methyl-1-hexanamine
- Question 15: N-methyl-2-heptanamine
- Question 16: 2-methyl-3-heptanamine
- Question 17: N-methyl-3,3-dimethyl-2-butanamine
- Question 18: N-propyl-2-pentanamine
- Question 19: N-ethyl-2-ethylbutanamide
- Question 20: 4,4-dimethylhexanamide
- Question 21: N-methyl-2,2-dimethylpentanamide
- Question 22: N-ethyl-N-methyl-2-methylpropanamine
- Question 23: 2,2-dimethylhexanamide
- Question 24: N-methyl-2-methyl-3-hexanamine
- Question 25: 2-ethyl-3,3-dimethylbutanamide