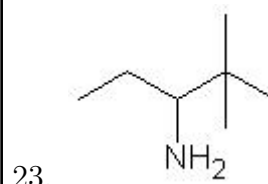
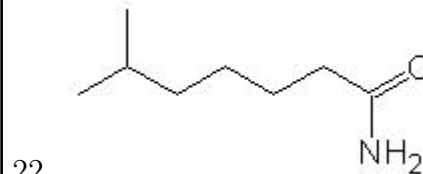
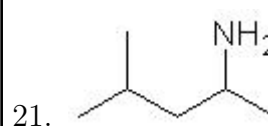
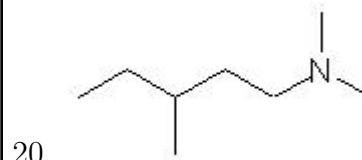
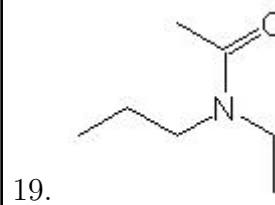
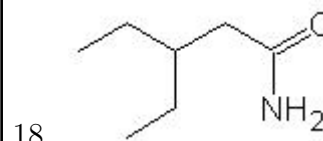
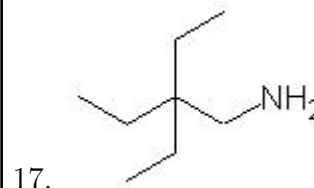
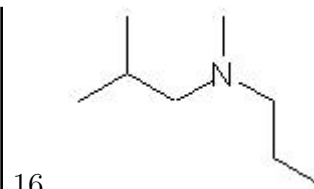
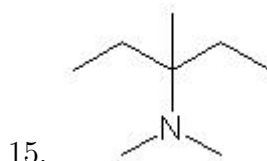
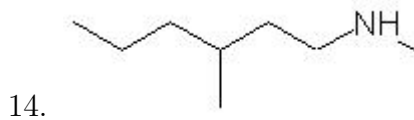
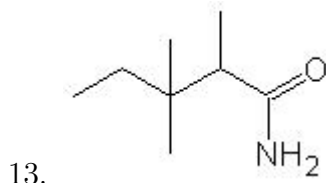
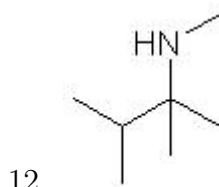
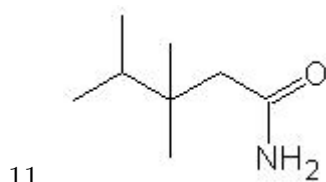
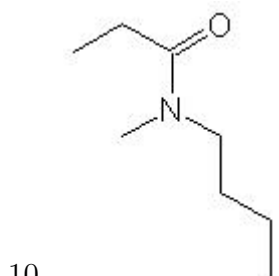
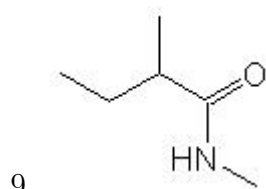
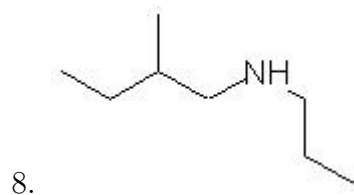
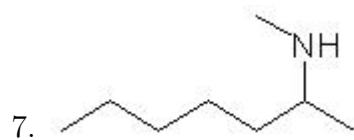
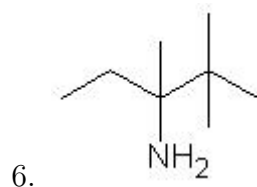
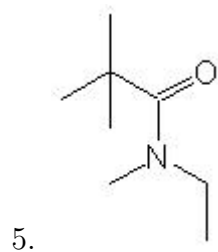
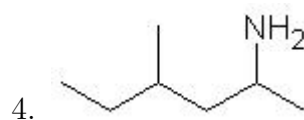
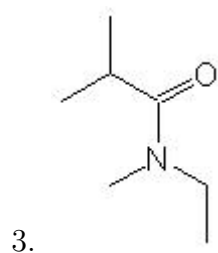
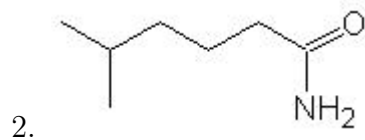
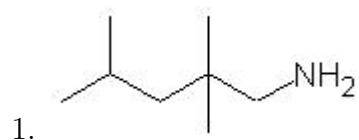


Name: _____

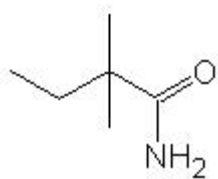
Class: _____

Date: _____

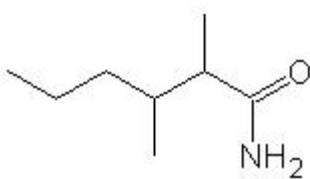
Name the following molecules using IUPAC nomenclature:



24.



25.



- Question 1: 2,2,4-trimethyl-1-butanamine
- Question 2: 5-methylhexanamide
- Question 3: N-ethyl-N-methyl-2-methylpropanamide
- Question 4: 4-methyl-2-hexanamine
- Question 5: N-ethyl-N-methyl-2,2-dimethylpropanamide
- Question 6: 2,2,3-trimethyl-3-pentanamine
- Question 7: N-methyl-2-heptanamine
- Question 8: N-propyl-2-methyl-1-butanamine
- Question 9: N-methyl-2-methylbutanamide
- Question 10: N-butyl-N-methylpropanamide
- Question 11: 3,3,4-trimethylpentanamide
- Question 12: N-methyl-2,3-dimethyl-2-butanamine
- Question 13: 2,3,3-trimethylpentanamide
- Question 14: N-methyl-3-methyl-1-hexanamine
- Question 15: N,N-dimethyl-3-methyl-3-pentanamine
- Question 16: N-methyl-N-propyl-2-methyl-1-propanamine
- Question 17: 2,2-diethyl-1-butanamine
- Question 18: 3-ethylpentanamide
- Question 19: N-ethyl-N-propylethanamide
- Question 20: N,N-dimethyl-3-methyl-1-pentanamine
- Question 21: 4-methyl-2-pentanamine
- Question 22: 6-methylheptanamide
- Question 23: 2,2-dimethyl-3-pentanamine
- Question 24: 2,2-dimethylbutanamide
- Question 25: 2,3-dimethylhexanamide