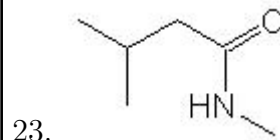
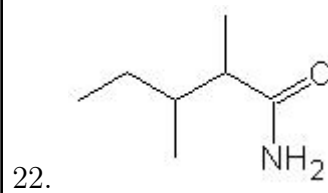
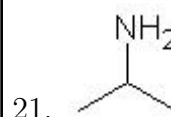
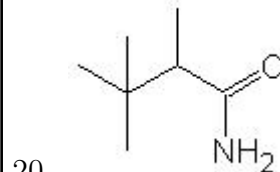
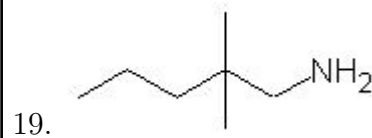
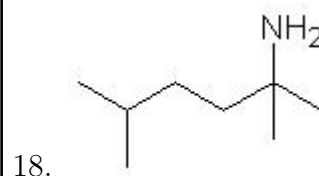
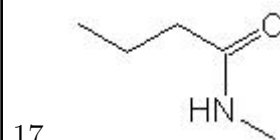
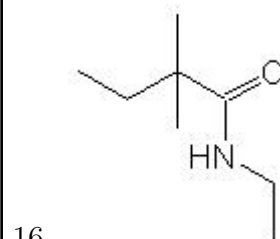
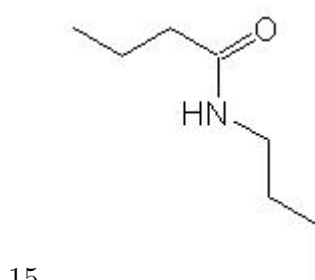
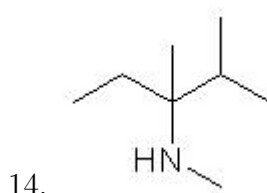
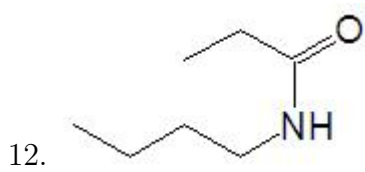
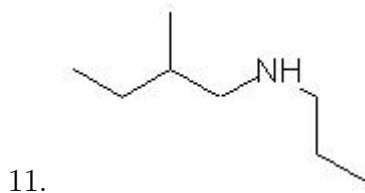
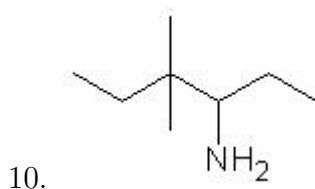
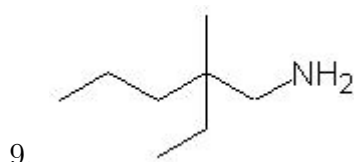
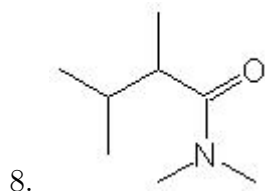
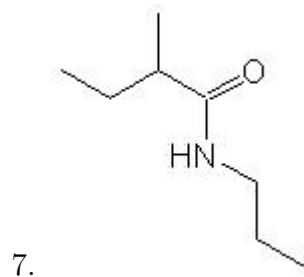
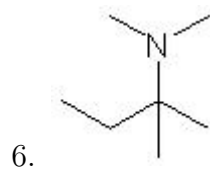
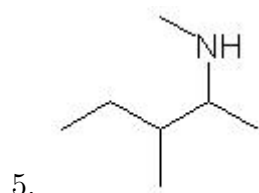
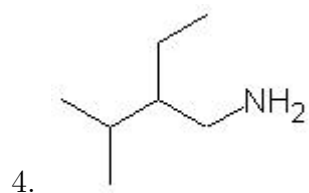
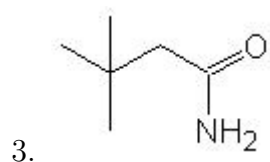
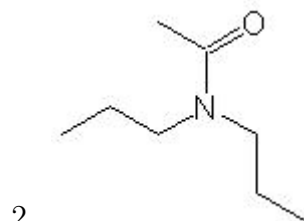
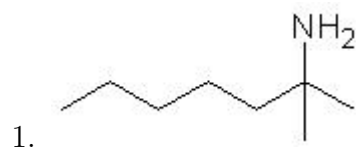


Name: \_\_\_\_\_

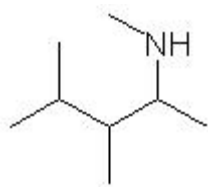
Class: \_\_\_\_\_

Date: \_\_\_\_\_

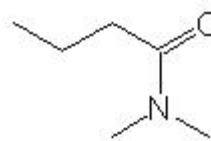
Name the following molecules using IUPAC nomenclature:



24.



25.



- Question 1: 2-methyl-2-heptanamine
- Question 2: N,N-dipropylethanamide
- Question 3: 3,3-dimethylbutanamide
- Question 4: 2-ethyl-3-methyl-1-butanamine
- Question 5: N-methyl-3-methyl-2-pentanamine
- Question 6: N,N-dimethyl-2-methyl-2-butanamine
- Question 7: N-propyl-2-methylbutanamide
- Question 8: N,N-dimethyl-2,3-dimethylbutanamide
- Question 9: 2-ethyl-2-methyl-1-pentanamine
- Question 10: 4,4-dimethyl-3-hexanamine
- Question 11: N-propyl-2-methyl-1-butanamine
- Question 12: N-butylpropanamide
- Question 13: N,N-dimethyl-1-butanamine
- Question 14: N-methyl-2,3-dimethyl-3-pentanamine
- Question 15: N-butylbutanamide
- Question 16: N-ethyl-2,2-dimethylbutanamide
- Question 17: N-methylbutanamide
- Question 18: 2,5-dimethyl-2-hexanamine
- Question 19: 2,2-dimethyl-1-pentanamine
- Question 20: 2,3,3-trimethylbutanamide
- Question 21: 2-propanamine
- Question 22: 2,3-dimethylpentanamide
- Question 23: N-methyl-3-methylbutanamide
- Question 24: N-methyl-3,4-dimethyl-2-pentanamine
- Question 25: N,N-dimethylbutanamide