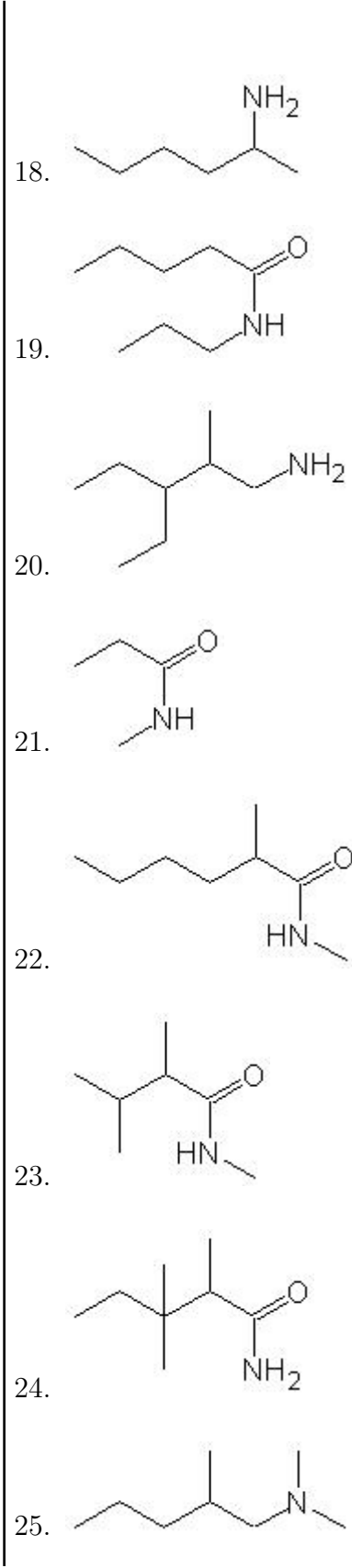
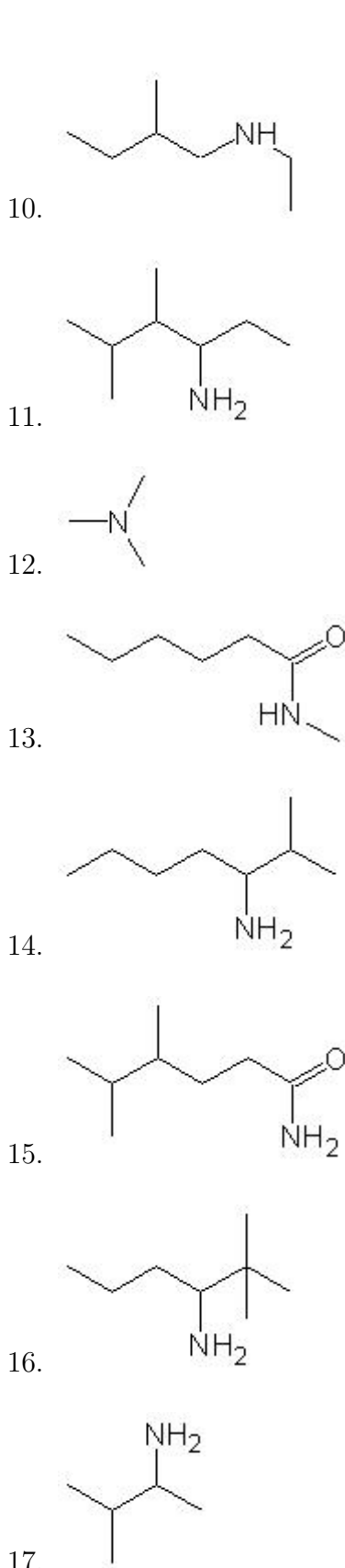
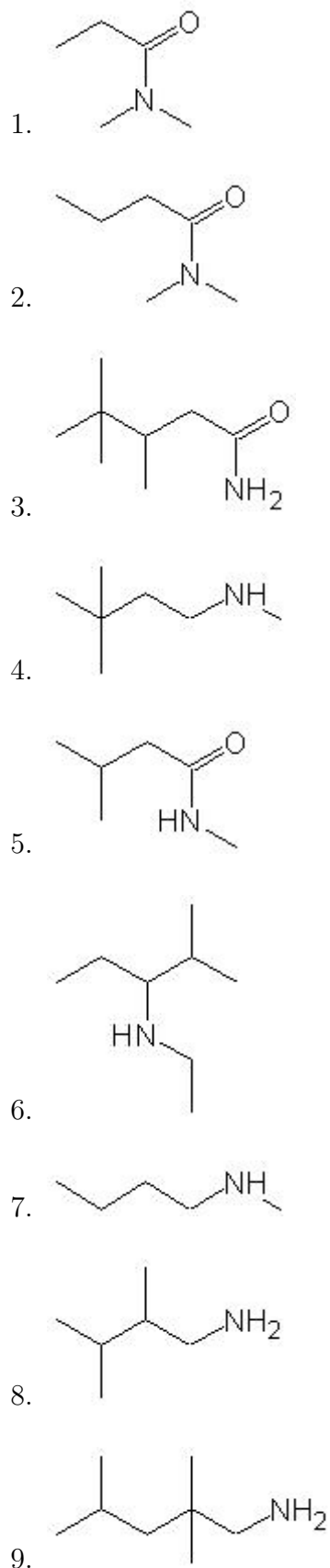


Name: \_\_\_\_\_

Class: \_\_\_\_\_

Date: \_\_\_\_\_

Name the following molecules using IUPAC nomenclature:



- Question 1: N,N-dimethylpropanamide
- Question 2: N,N-dimethylbutanamide
- Question 3: 3,4,4-trimethylpentanamide
- Question 4: N-methyl-3,3-dimethyl-1-butanamine
- Question 5: N-methyl-3-methylbutanamide
- Question 6: N-ethyl-2-methyl-3-pentanamine
- Question 7: N-methyl-1-butanamine
- Question 8: 2,3-dimethyl-1-butanamine
- Question 9: 2,2,4-trimethyl-1-pentanamine
- Question 10: N-ethyl-2-methyl-1-butanamine
- Question 11: 4,5-dimethyl-3-hexanamine
- Question 12: N,N-dimethylmethanamine
- Question 13: N-methylhexanamide
- Question 14: 2-methyl-3-heptanamine
- Question 15: 4,5-dimethylhexanamide
- Question 16: 2,2-dimethyl-3-hexanamine
- Question 17: 3-methyl-2-butanamine
- Question 18: 2-hexanamine
- Question 19: N-propylpentanamide
- Question 20: 3-ethyl-2-methyl-1-pentanamine
- Question 21: N-methylpropanamide
- Question 22: N-methyl-2-methylhexanamide
- Question 23: N-methyl-2,3-dimethylbutanamide
- Question 24: 2,3,3-trimethylpentanamide
- Question 25: N,N-dimethyl-2-methyl-1-pentanamine