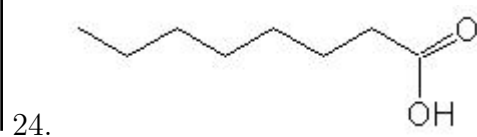
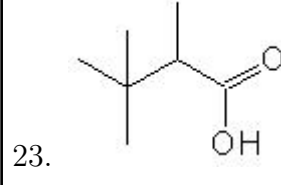
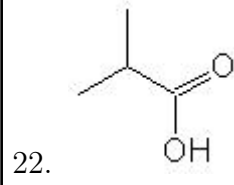
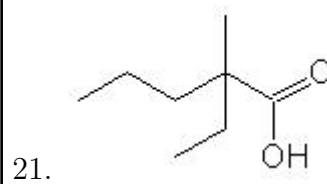
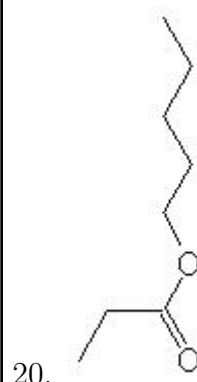
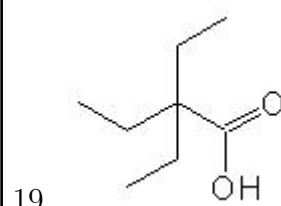
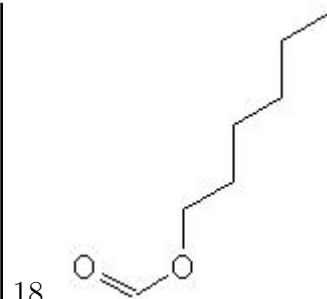
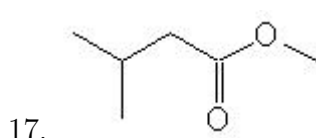
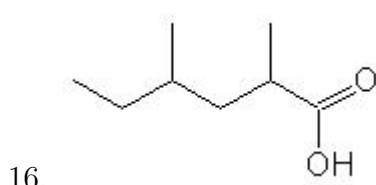
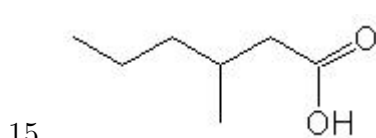
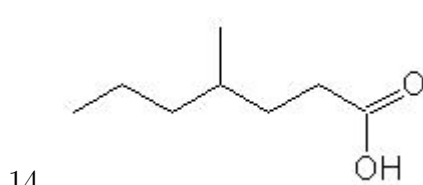
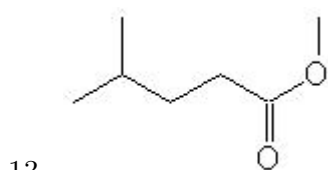
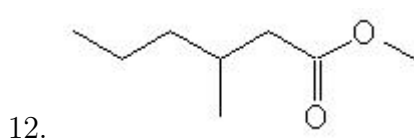
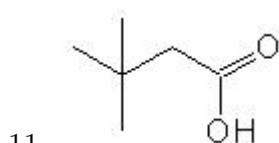
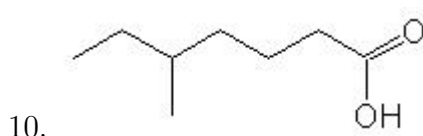
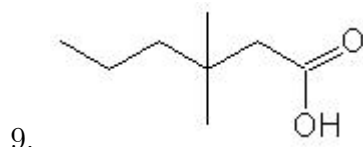
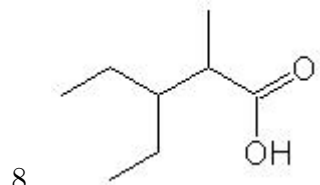
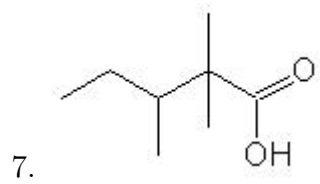
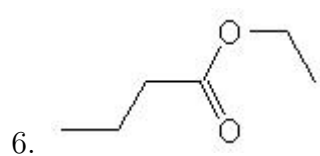
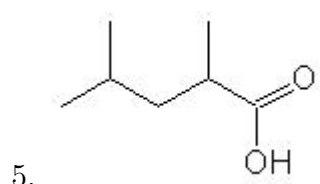
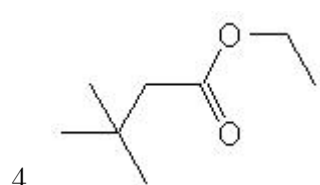
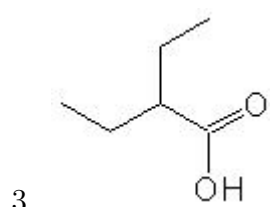
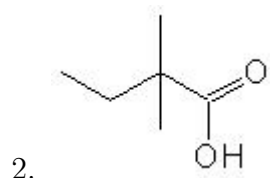
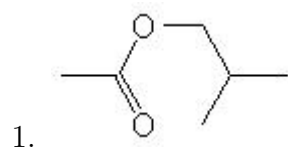


Name: _____

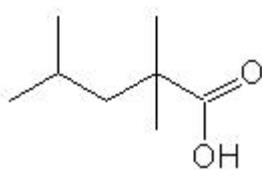
Class: _____

Date: _____

Name the following molecules using IUPAC nomenclature:



25.



- Question 1: 2,2-dimethylethyl ethanoate
- Question 2: 2,2-dimethylbutanoic acid
- Question 3: 2-ethylbutanoic acid
- Question 4: ethyl 3,3-dimethylbutanoate
- Question 5: 2,4-dimethylpentanoic acid
- Question 6: ethyl butanoate
- Question 7: 2,2,3-trimethylpentanoic acid
- Question 8: 3-ethyl-2-methylpentanoic acid
- Question 9: 3,3-dimethylhexanoic acid
- Question 10: 5-methylheptanoic acid
- Question 11: 3,3-dimethylbutanoic acid
- Question 12: methyl 3-methylhexanoate
- Question 13: methyl 4-methylpentanoate
- Question 14: 4-methylheptanoic acid
- Question 15: 3-methylhexanoic acid
- Question 16: 2,4-dimethylhexanoic acid
- Question 17: methyl 3-methylbutanoate
- Question 18: hexyl methanoate
- Question 19: 2,2-diethylbutanoic acid
- Question 20: 1-pentyl propanoate
- Question 21: 2-ethyl-2-methylpentanoic acid
- Question 22: 2-methylpropanoic acid
- Question 23: 2,3,3-trimethylbutanoic acid
- Question 24: octanoic acid
- Question 25: 2,2,4-trimethylpentanoic acid