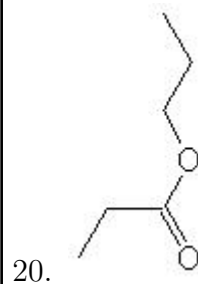
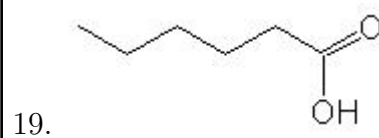
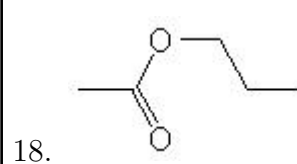
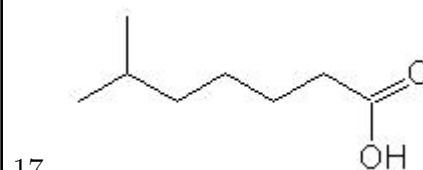
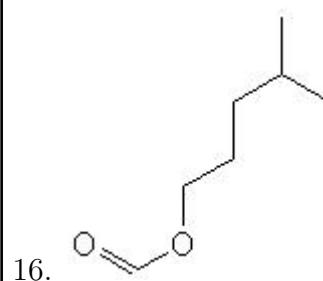
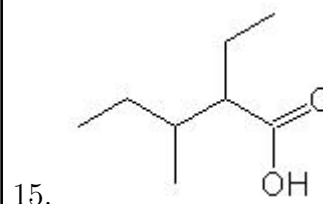
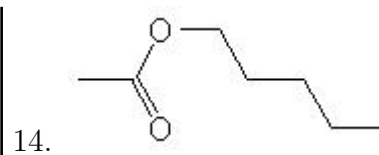
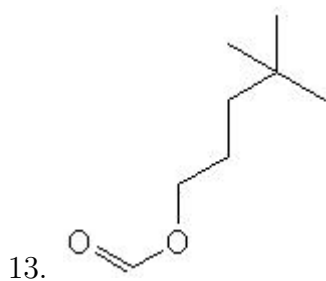
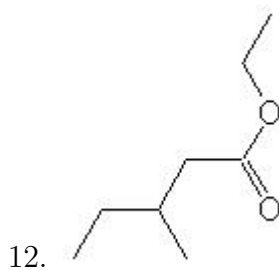
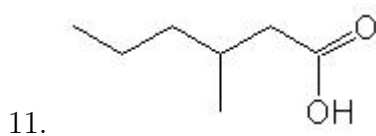
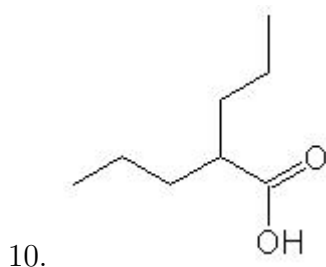
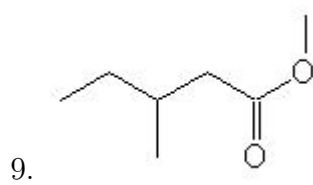
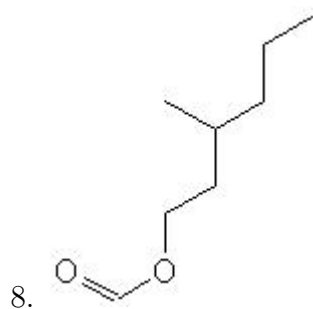
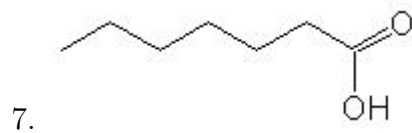
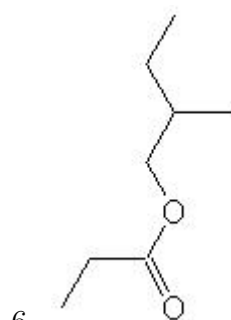
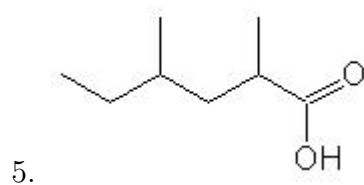
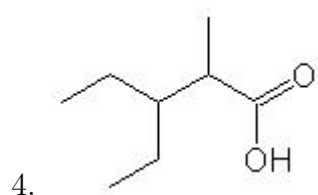
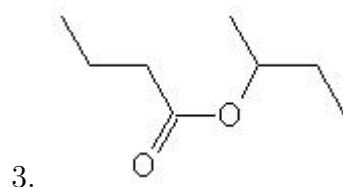
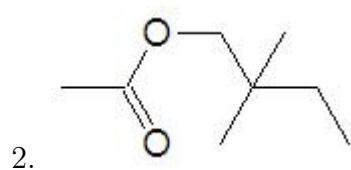
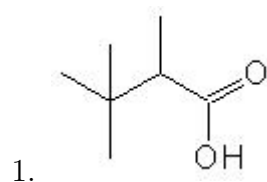


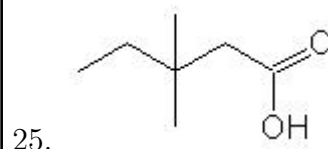
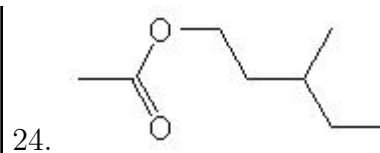
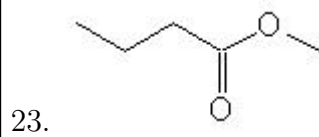
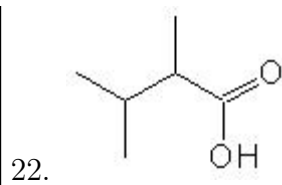
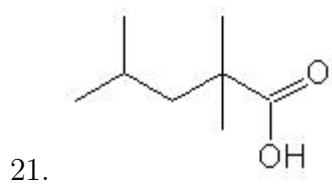
Name: _____

Class: _____

Date: _____

Name the following molecules using IUPAC nomenclature:





- Question 1: 2,3,3-trimethylbutanoic acid
- Question 2: 2,2-dimethylbutyl ethanoate
- Question 3: propyl-3-methyl butanoate
- Question 4: 3-ethyl-2-methylpentanoic acid
- Question 5: 2,4-dimethylhexanoic acid
- Question 6: 2-methylbutyl propanoate
- Question 7: heptanoic acid
- Question 8: 3-methylhexyl methanoate
- Question 9: methyl 3-methylpentanoate
- Question 10: 2-propylpentanoic acid
- Question 11: 3-methylhexanoic acid
- Question 12: ethyl 3-methylpentanoate
- Question 13: 4,4-dimethylpentyl methanoate
- Question 14: pentyl ethanoate
- Question 15: 2-ethyl-3-methylpentanoic acid
- Question 16: 4-methylpentyl methanoate
- Question 17: 6-methylheptanoic acid
- Question 18: propyl ethanoate
- Question 19: hexanoic acid
- Question 20: propyl propanoate
- Question 21: 2,2,4-trimethylpentanoic acid
- Question 22: 2,3-dimethylbutanoic acid
- Question 23: methyl butanoate
- Question 24: 3-methylpentyl ethanoate
- Question 25: 3,3-dimethylpentanoic acid