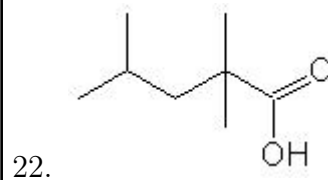
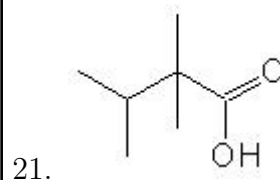
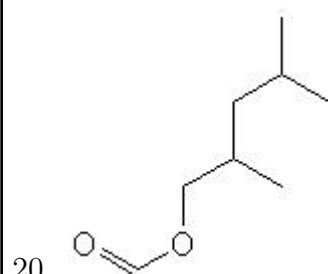
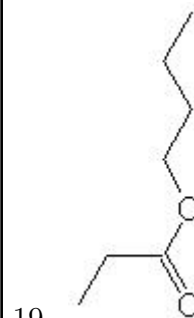
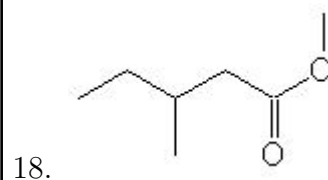
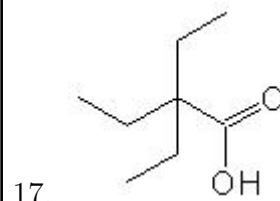
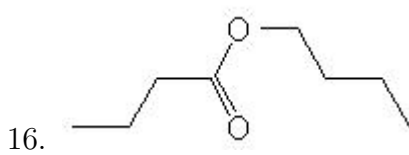
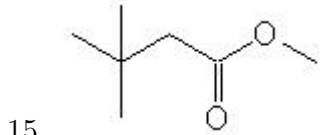
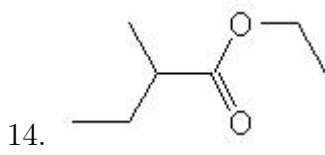
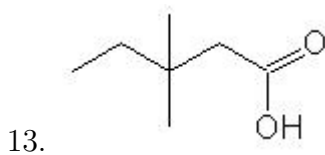
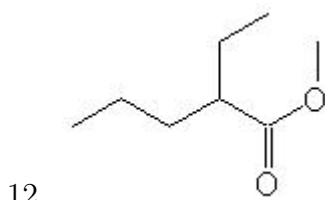
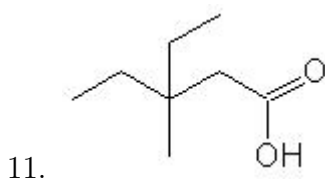
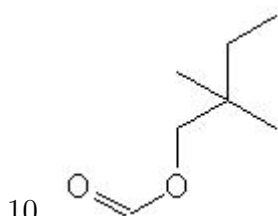
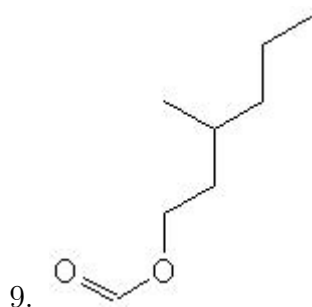
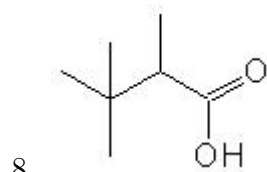
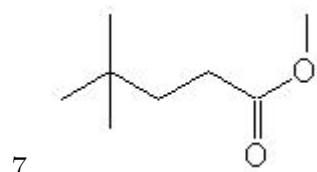
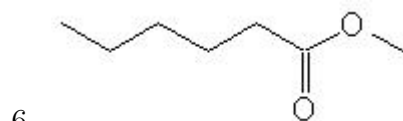
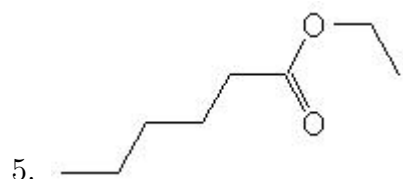
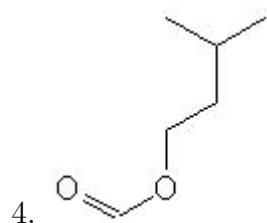
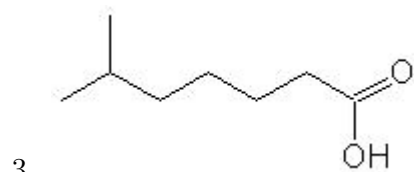
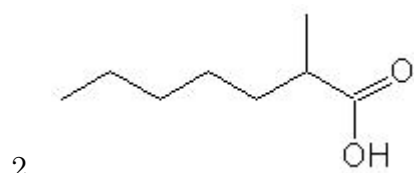
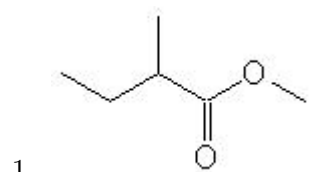


Name: _____

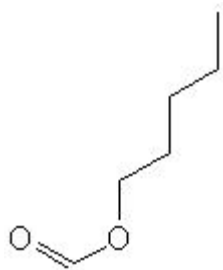
Class: _____

Date: _____

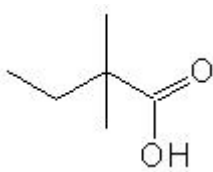
Name the following molecules using IUPAC nomenclature:



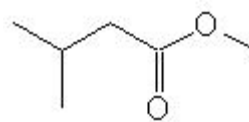
23.



24.



25.



- Question 1: methyl 2-methylbutanoate
- Question 2: 2-methylheptanoic acid
- Question 3: 6-methylheptanoic acid
- Question 4: 3-methylbutyl methanoate
- Question 5: ethyl hexanoate
- Question 6: methyl hexanoate
- Question 7: methyl 4,4-dimethylpentanoate
- Question 8: 2,3,3-trimethylbutanoic acid
- Question 9: 3-methylhexyl methanoate
- Question 10: 2,2-dimethylbutyl methanoate
- Question 11: 3-ethyl-3-methylpentanoic acid
- Question 12: methyl 2-ethylpentanoate
- Question 13: 3,3-dimethylpentanoic acid
- Question 14: ethyl 2-methylbutanoate
- Question 15: methyl 3,3-dimethylbutanoate
- Question 16: butyl butanoate
- Question 17: 2,2-diethylbutanoic acid
- Question 18: methyl 3-methylpentanoate
- Question 19: butyl propanoate
- Question 20: 2,4-dimethylpentyl methanoate
- Question 21: 2,2,3-trimethylbutanoic acid
- Question 22: 2,2,4-trimethylpentanoic acid
- Question 23: pentyl methanoate
- Question 24: 2,2-dimethylbutanoic acid
- Question 25: methyl 3-methylbutanoate