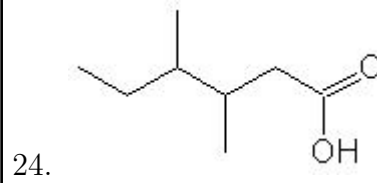
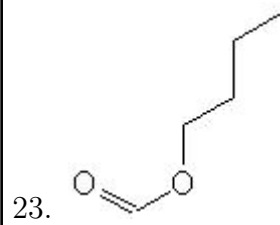
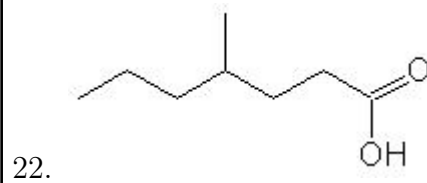
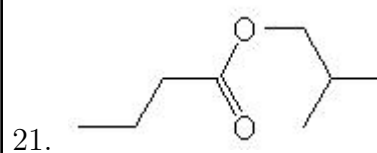
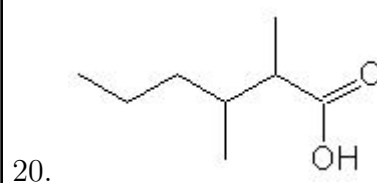
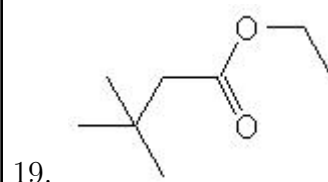
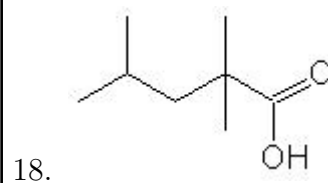
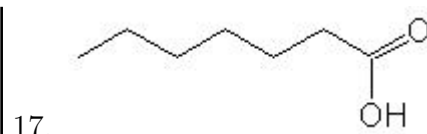
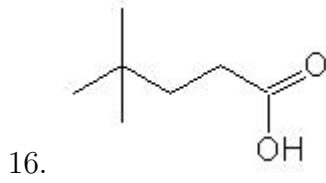
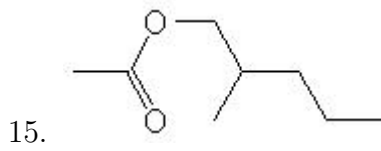
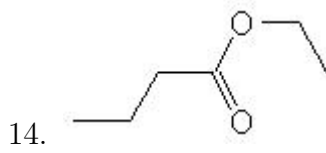
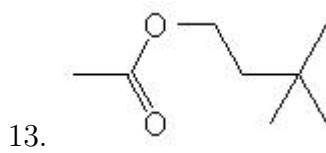
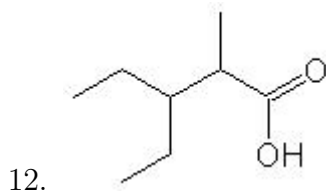
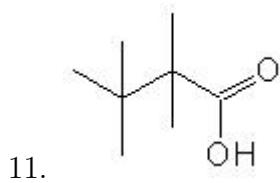
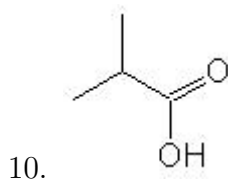
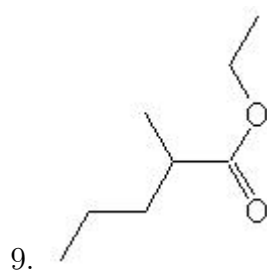
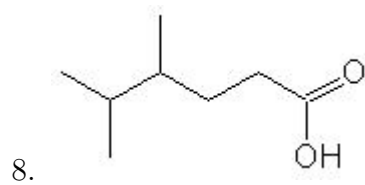
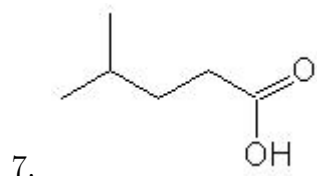
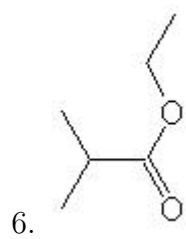
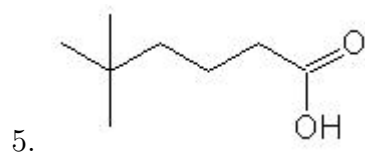
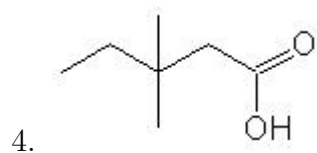
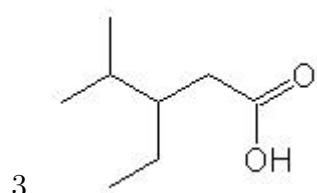
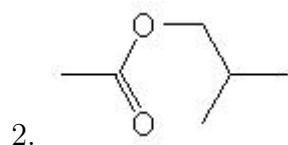
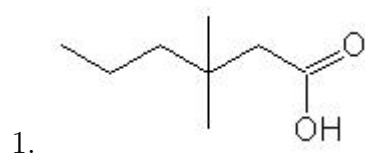


Name: _____

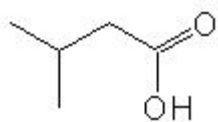
Class: _____

Date: _____

Name the following molecules using IUPAC nomenclature:



25.



- Question 1: 3,3-dimethylhexanoic acid
- Question 2: 2-methylpropyl ethanoate
- Question 3: 3-ethyl-4-methylpentanoic acid
- Question 4: 3,3-dimethylpentanoic acid
- Question 5: 5,5-dimethylhexanoic acid
- Question 6: ethyl 2-methylpropanoate
- Question 7: 4-methylpentanoic acid
- Question 8: 4,5-dimethylhexanoic acid
- Question 9: ethyl 2-methylpentanoate
- Question 10: 2-methylpropanoic acid
- Question 11: 2,2,3,3-tetramethylbutanoic acid
- Question 12: 3-ethyl-2-methylpentanoic acid
- Question 13: 3,3-dimethylbutyl ethanoate
- Question 14: ethyl butanoate
- Question 15: 2-methylpentyl ethanoate
- Question 16: 4,4-dimethylpentanoic acid
- Question 17: heptanoic acid
- Question 18: 2,2,4-trimethylpentanoic acid
- Question 19: ethyl 3,3-dimethylbutanoate
- Question 20: 2,3-dimethylhexanoic acid
- Question 21: 2-methylpropyl butanoate
- Question 22: 4-methylheptanoic acid
- Question 23: butyl methanoate
- Question 24: 3,4-dimethylhexanoic acid
- Question 25: 3-methylbutanoic acid