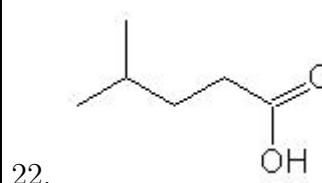
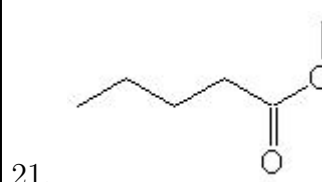
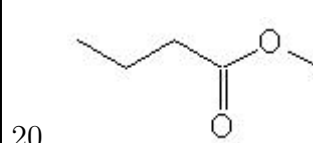
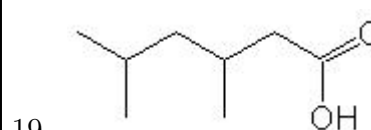
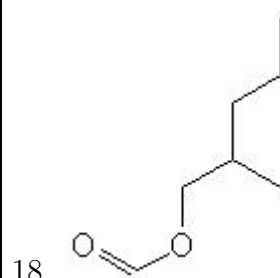
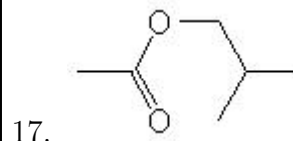
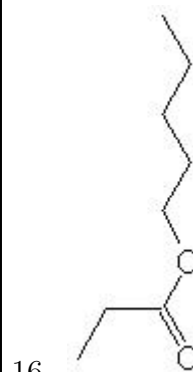
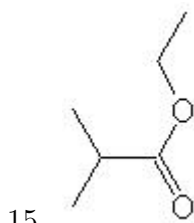
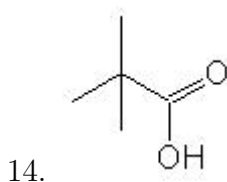
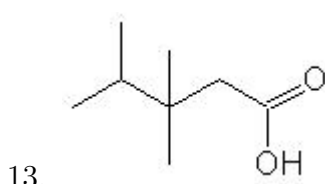
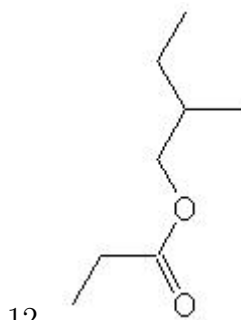
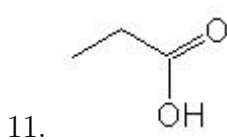
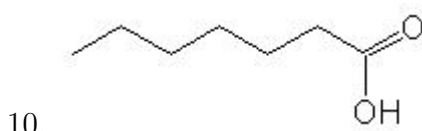
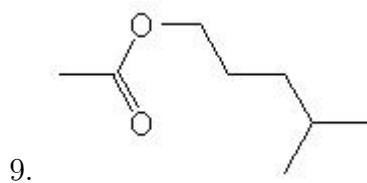
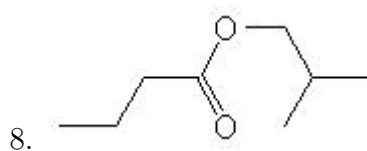
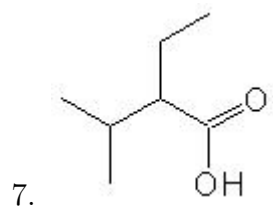
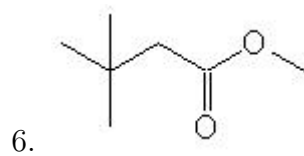
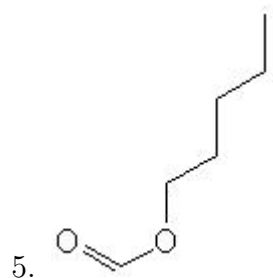
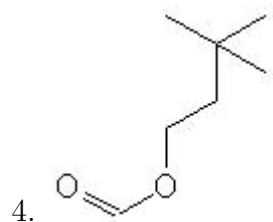
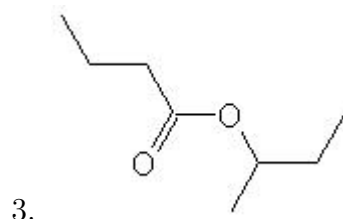
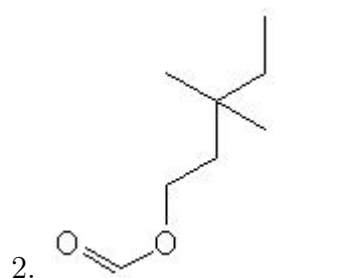
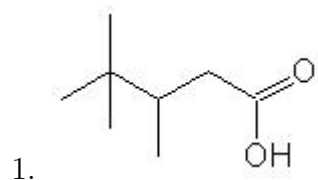


Name: _____

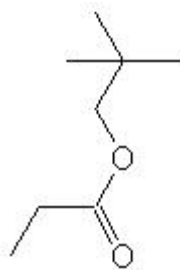
Class: _____

Date: _____

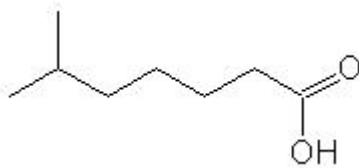
Name the following molecules using IUPAC nomenclature:



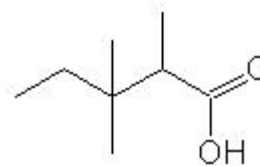
23.



24.



25.



- Question 1: 3,4,4-trimethylpentanoic acid
- Question 2: 3,3-dimethylpentyl methanoate
- Question 3: propyl-2-methyl butanoate
- Question 4: 3,3-dimethylbutyl methanoate
- Question 5: pentyl methanoate
- Question 6: methyl 3,3-dimethylbutanoate
- Question 7: 2-ethyl-3-methylbutanoic acid
- Question 8: 2-methylpropyl butanoate
- Question 9: 4-methylpentyl ethanoate
- Question 10: heptanoic acid
- Question 11: propanoic acid
- Question 12: 2-methylbutyl propanoate
- Question 13: 3,3,4-trimethylpentanoic acid
- Question 14: 2,2-dimethylpropanoic acid
- Question 15: ethyl 2-methylpropanoate
- Question 16: 1-pentyl propanoate
- Question 17: 2-methylpropyl ethanoate
- Question 18: 2-methylpentyl methanoate
- Question 19: 3,5-dimethylhexanoic acid
- Question 20: methyl butanoate
- Question 21: methyl pentanoate
- Question 22: 4-methylpentanoic acid
- Question 23: 2,2-dimethylpropyl propanoate
- Question 24: 6-methylheptanoic acid
- Question 25: 2,3,3-trimethylpentanoic acid