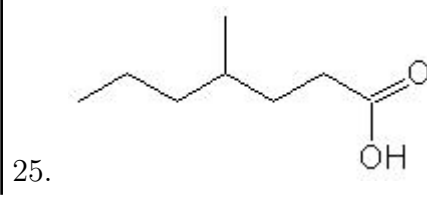
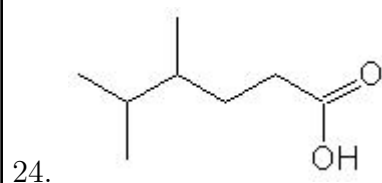
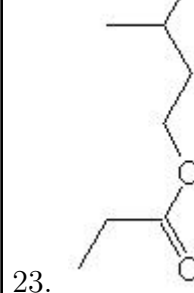
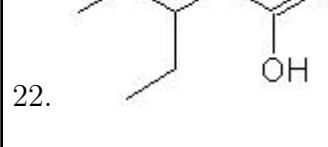
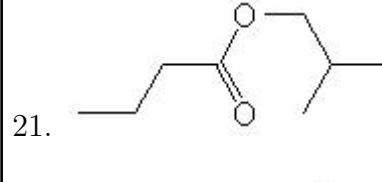
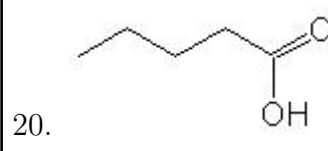
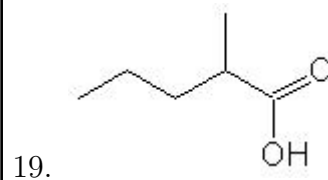
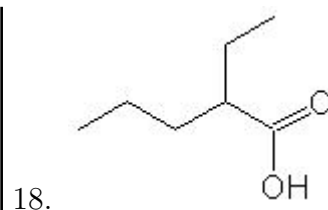
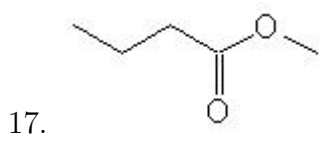
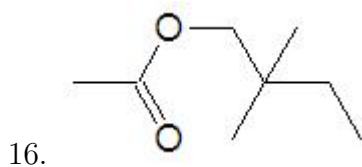
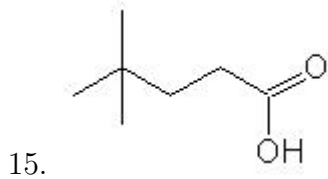
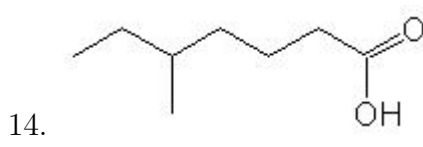
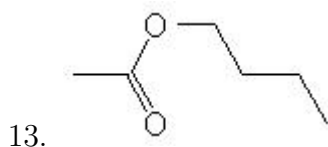
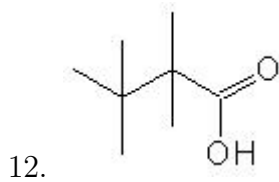
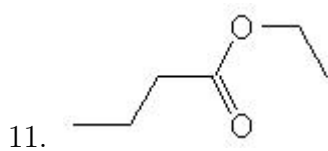
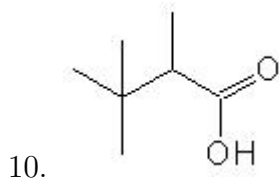
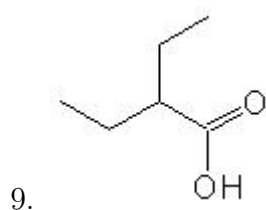
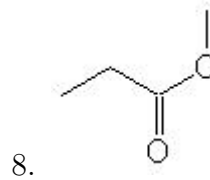
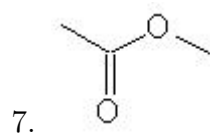
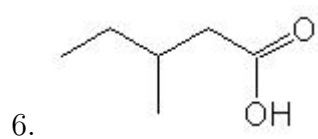
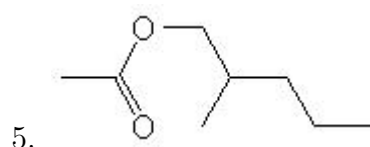
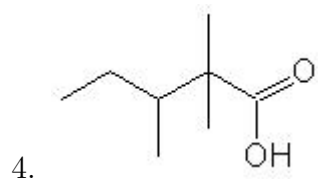
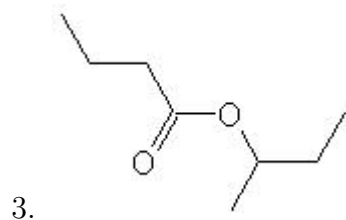
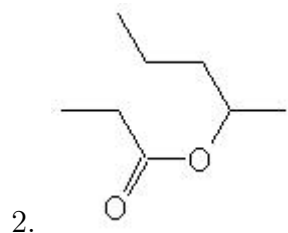
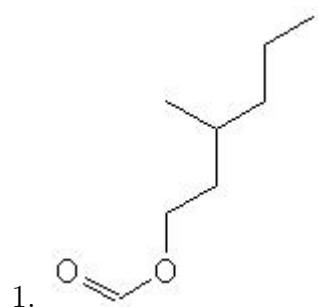


Name: \_\_\_\_\_

Class: \_\_\_\_\_

Date: \_\_\_\_\_

Name the following molecules using IUPAC nomenclature:



- Question 1: 3-methylhexyl methanoate
- Question 2: butyl-2-methyl propanoate
- Question 3: propyl-2-methyl butanoate
- Question 4: 2,2,3-trimethylpentanoic acid
- Question 5: 2-methylpentyl ethanoate
- Question 6: 3-methylpentanoic acid
- Question 7: methyl ethanoate
- Question 8: methyl propanoate
- Question 9: 2-ethylbutanoic acid
- Question 10: 2,3,3-trimethylbutanoic acid
- Question 11: ethyl butanoate
- Question 12: 2,2,3,3-tetramethylbutanoic acid
- Question 13: butyl ethanoate
- Question 14: 5-methylheptanoic acid
- Question 15: 4,4-dimethylpentanoic acid
- Question 16: 2,2-dimethylbutyl ethanoate
- Question 17: methyl butanoate
- Question 18: 2-ethylpentanoic acid
- Question 19: 2-methylpentanoic acid
- Question 20: pentanoic acid
- Question 21: 2-methylpropyl butanoate
- Question 22: 3-ethylpentanoic acid
- Question 23: 3-methylbutyl propanoate
- Question 24: 4,5-dimethylhexanoic acid
- Question 25: 4-methylheptanoic acid