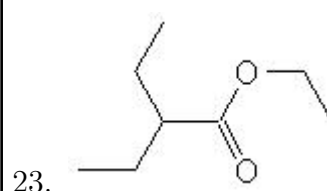
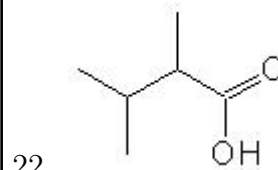
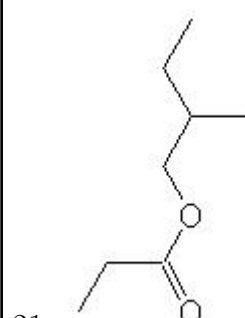
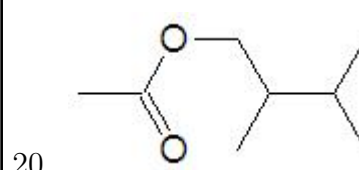
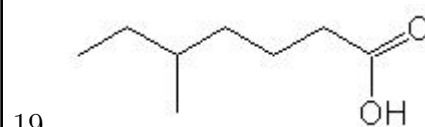
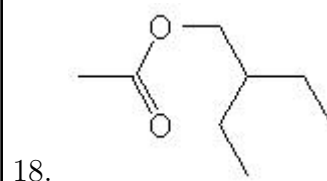
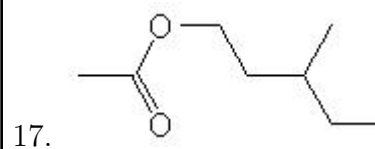
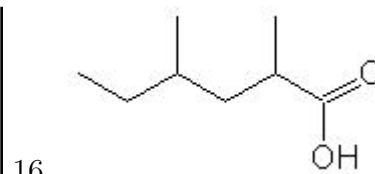
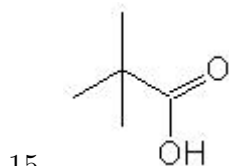
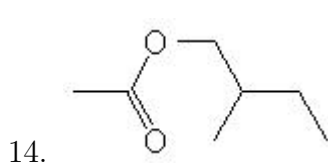
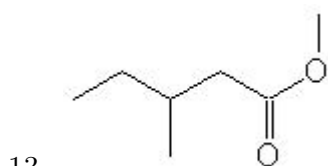
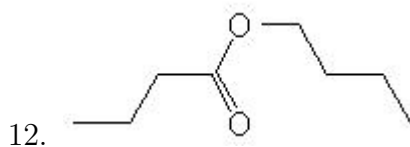
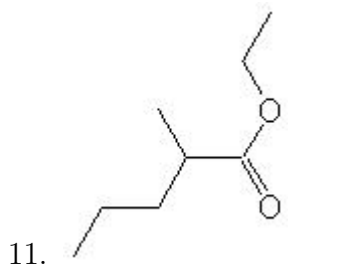
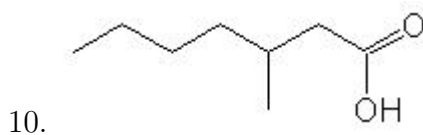
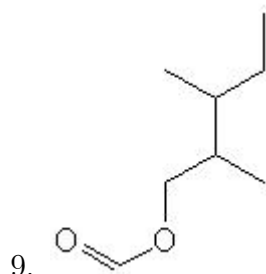
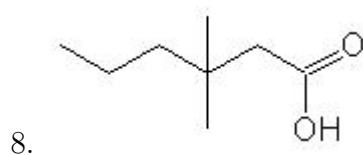
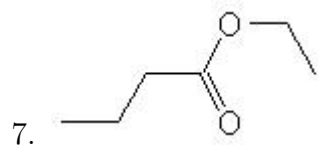
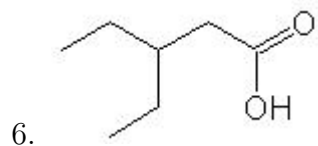
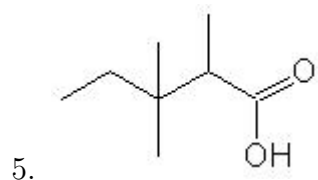
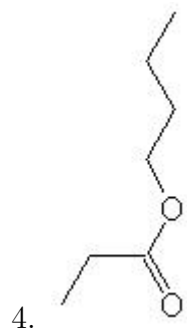
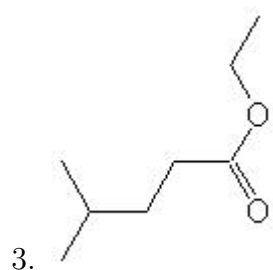
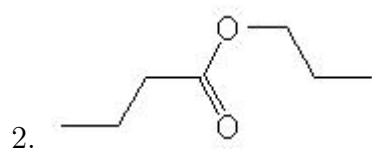
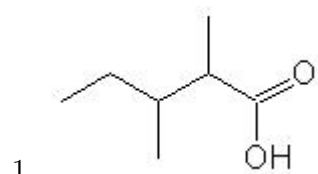


Name: _____

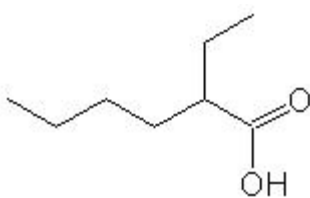
Class: _____

Date: _____

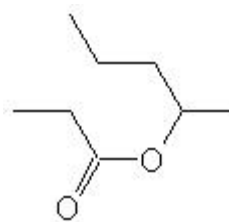
Name the following molecules using IUPAC nomenclature:



24.



25.



- Question 1: 2,3-dimethylpentanoic acid
- Question 2: propyl butanoate
- Question 3: ethyl 4-methylpentanoate
- Question 4: butyl propanoate
- Question 5: 2,3,3-trimethylpentanoic acid
- Question 6: 3-ethylpentanoic acid
- Question 7: ethyl butanoate
- Question 8: 3,3-dimethylhexanoic acid
- Question 9: 2,3-dimethylpentyl methanoate
- Question 10: 3-methylheptanoic acid
- Question 11: ethyl 2-methylpentanoate
- Question 12: butyl butanoate
- Question 13: methyl 3-methylpentanoate
- Question 14: 2-methylbutyl ethanoate
- Question 15: 2,2-dimethylpropanoic acid
- Question 16: 2,4-dimethylhexanoic acid
- Question 17: 3-methylpentyl ethanoate
- Question 18: 2-ethylbutyl ethanoate
- Question 19: 5-methylheptanoic acid
- Question 20: 2,3-dimethylbutyl ethanoate
- Question 21: 2-methylbutyl propanoate
- Question 22: 2,3-dimethylbutanoic acid
- Question 23: ethyl 2-ethylbutanoate
- Question 24: 2-ethylhexanoic acid
- Question 25: butyl-2-methyl propanoate