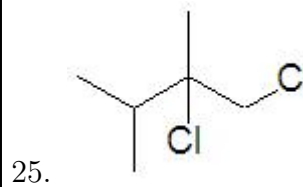
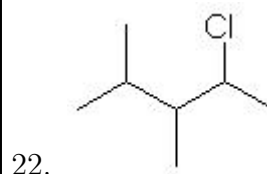
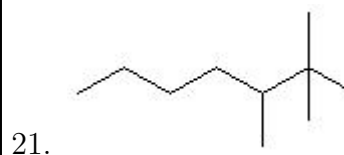
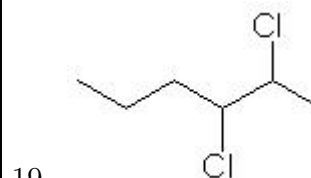
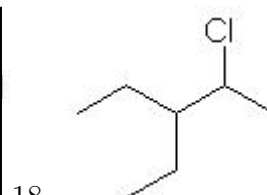
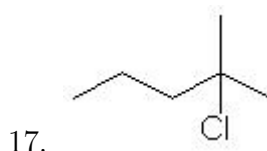
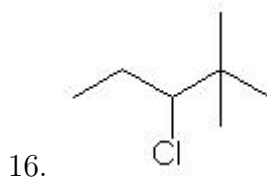
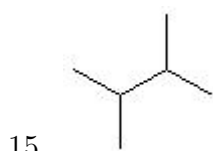
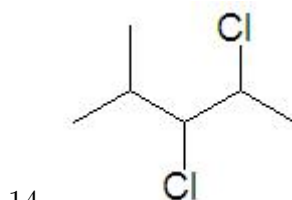
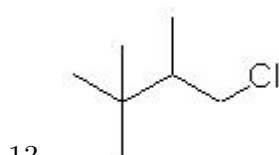
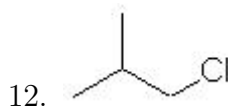
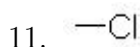
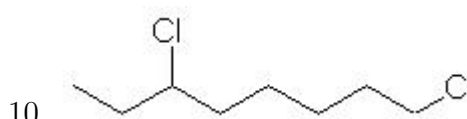
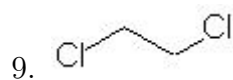
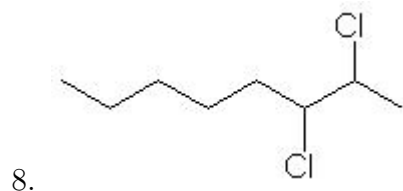
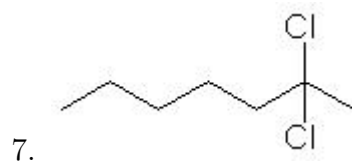
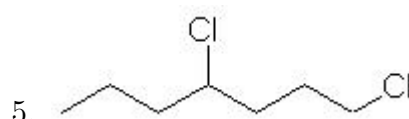
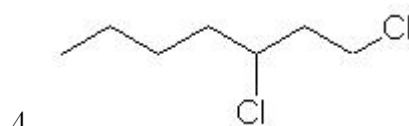
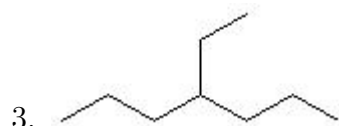
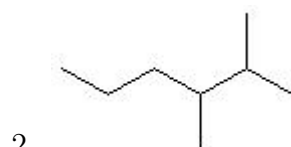



Name: \_\_\_\_\_

Class: \_\_\_\_\_

Date: \_\_\_\_\_

Name the following molecules using IUPAC nomenclature:



- Question 1: 3-methylheptane
- Question 2: 2,3-dimethylhexane
- Question 3: 4-ethylheptane
- Question 4: 1,3-dichloroheptane
- Question 5: 1,4-dichloroheptane
- Question 6: nonane
- Question 7: 2,2-dichloroheptane
- Question 8: 2,3-dichlorooctane
- Question 9: 1,2-dichloroethane
- Question 10: 1,6-dichlorooctane
- Question 11: chloromethane
- Question 12: 1-chloro-2-methylpropane
- Question 13: 1-chloro-2,3,3-trimethylbutane
- Question 14: 2,3-dichloro-4-methylpentane
- Question 15: 2,3-dimethylbutane
- Question 16: 3-chloro-2,2-dimethylpentane
- Question 17: 2-chloro-2-methylpentane
- Question 18: 2-chloro-3-ethylpentane
- Question 19: 2,3-dichlorohexane
- Question 20: 2-methylpentane
- Question 21: 2,2,3-trimethylheptane
- Question 22: 2-chloro-3,4-dimethylpentane
- Question 23: 2-chloropentane
- Question 24: butane
- Question 25: 1,2-dichloro-2,3-dimethylbutane