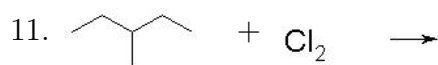
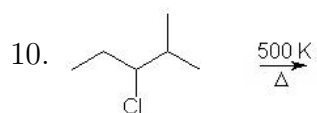
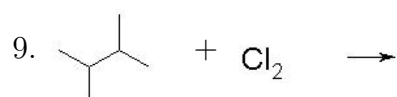
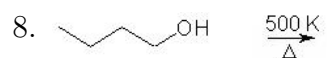
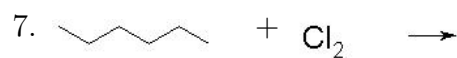
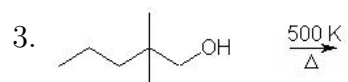
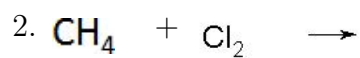
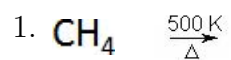
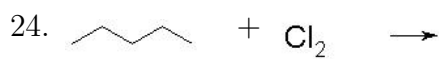
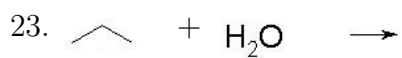
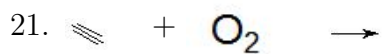
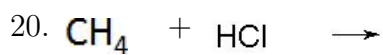
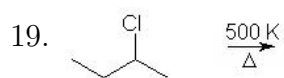
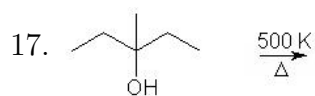
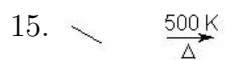
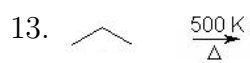


Complete the following reactions. Circle the most favored products.






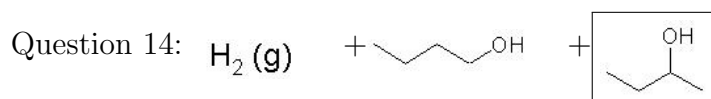
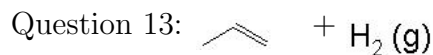
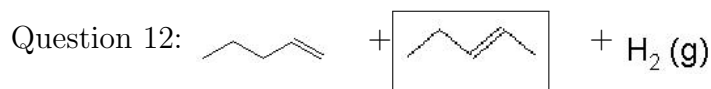
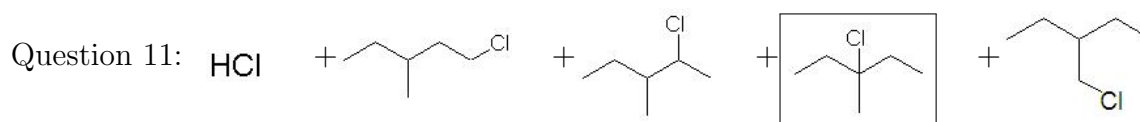
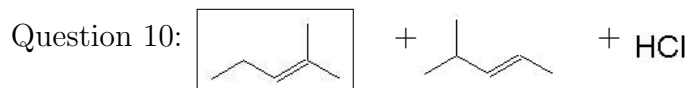
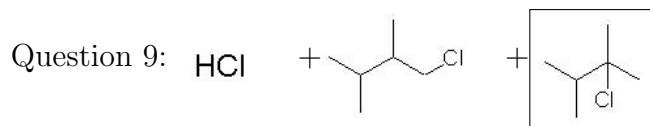
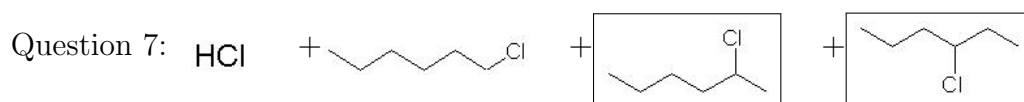
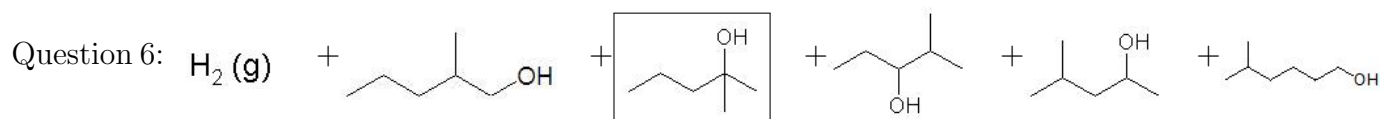
Question 1: No Reaction

Question 2:  $\text{HCl} + \text{---Cl}$

Question 3: No Reaction

Question 4:  $\text{---CO}_2(\text{g}) + \text{---H}_2\text{O}(\text{g}) + \text{Heat}$  Balance: (1,10,7,6)

Question 5:  $\text{---CO}_2(\text{g}) + \text{---H}_2\text{O}(\text{g}) + \text{Heat}$  Balance: (1,7,5,4)



Question 16:  $\text{---CO}_2(\text{g}) + \text{---H}_2\text{O}(\text{g}) + \text{Heat}$  Balance: (2,21,14,14)

